



Republic of the Philippines
DEPARTMENT OF EDUCATION



K to 12 Basic Education Curriculum Technology and Livelihood Education Learning Module



ELECTRICAL INSTALLATION AND MAINTENANCE

EXPLORATORY COURSE

Grades 7 and Grade 8

TABLE OF CONTENTS

What This Module Is About	2
How to Use This Module	4
LESSON 1 – Prepare Electrical Supplies, Materials, and Tools.....	5 - 46
LESSON 2 – Perform Mensuration and Calculation	47 - 74
LESSON 3 – Interpret Technical Drawing and Plans.....	75 - 93
LESSON 4 – Maintain Tools and Equipment	94 - 127
LESSON 5 – Practice Occupational Safety and Health.....	128 - 158
ANSWER KEYS.....	159 - 169
Acknowledgment.....	170



What This Module Is About

Welcome to the world of ***Electrical Installation and Maintenance!***

This module is an exploratory course which leads you to ***Electrical Installation and Maintenance*** National Certificate Level II (NC II)¹. It covers competencies that a Grade 7 / Grade 8 Technology and Livelihood Education (TLE) student ought to possess, namely:

- 1) Prepare electrical supplies, materials, and tools;
- 2) Perform mensuration and calculations;
- 3) Interpret technical drawings and plans;
- 4) Maintain tools and equipment; and
- 5) Practice occupational health and safety.

These competencies are covered separately in five lessons. As shown below, each lesson is directed to the attainment of one or two learning outcomes:

Lesson 1 – Prepare Electrical Supplies, Materials, and Tools

- LO1. Identify electrical supplies, materials, and tools needed in electrical/wiring installation
- LO 2. Request appropriate supplies, materials, and tools for a specific job
- LO 3. Receive and inspect electrical supplies, materials, and tools

Lesson 2 – Perform Mensuration and Calculations

- LO 1. Select measuring tools and instruments
- LO 2. Carry out measurements and calculations

Lesson 3 – Interpret Technical Drawing and Plans

- LO1. Analyze signs, symbols, and data
- LO2. Interpret technical drawings and plans

Lesson 4 – Maintain Tools and Equipment

- LO 1. Check condition of tools and equipment
- LO 2. Perform basic preventive maintenance
- LO 3. Store tools and equipment

¹**NATIONAL CERTIFICATE (NC)** is a certification issued to individuals who achieved all the required units of competency for a national qualification as defined under the Training Regulations. NCs are aligned to specific levels within the PTQF. (**TESDA Board Resolution No. 2004-13, Training Regulations Framework**)

NATIONAL CERTIFICATE LEVEL refers to the four (4) qualification levels defined in the Philippine TVET Qualifications Framework (PTQF) where the worker with:

- a. **NC I** performs a routine and predictable tasks; has little judgment; and, works under supervision;
- b. **NC II** performs prescribed range of functions involving known routines and procedures; has limited choice and complexity of functions, and has little accountability;

Lesson 5 – Practice Occupational Health and Safety

LO 1. Identify hazards and risks

LO 2. Evaluate risks and hazards

LO 3. Control hazards and risks

Your success in this exploratory course on ***Electrical Installation and Maintenance*** is shown in your ability to perform the performance standards found in each learning outcome.



How to Use This Module

This module has 5 lessons. Each lesson has the following parts:

- Learning Outcomes
- Performance Standards
- Materials/Resources
- Definition of Terms
- What Do You Already Know?
- What Do You Need to Know?
- How Much Have You Learned?
- How Do You Apply What You Learned?
- How Well Did You Perform?
- How Do You Extend Your Learning?
- References

To get the most from this module, you need to do the following:

1. Begin by reading and understanding the Learning Outcome/s and Performance Standards. These tell you what you should know and be able to do at the end of this module.
2. Find out what you already know by taking the Pretest. Then, check your answer against the Answer Key. If you get 99 to 100% of the items correctly, you may proceed to the next lesson. If you failed to get 99 to 100% correctly, go through the lesson again and review the items which you failed to get.
3. Do the required Learning Activities. They begin with one or more Information Sheets. An Information Sheet contains important notes or basic information that you need to know. After reading the Information Sheet, test yourself on how much you learned by means of the Self-check. Refer to the Answer Key for correction and to the Information Sheet when you do not get all test items correctly. This will ensure your mastery of basic information.
4. Demonstrate what you learned by doing what the Activity / Operation /Job Sheet directs you to do.
5. You must be able to apply what you have learned in another activity or in real life situations.
6. Accomplish the Scoring Rubrics for you to know how well you performed.

Each lesson also provides you with references and definitions of key terms for your guide.



If you have questions, ask your teacher for assistance.

LESSON 1

Prepare Electrical Supplies, Materials, and Tools



LEARNING OUTCOMES:

At the end of this lesson, you are expected to do the following:

- LO 1. identify electrical supplies, materials, and tools;
- LO 2. request appropriate supplies, materials, and tools for a specific job; and
- LO 3. receive and inspect electrical supplies, materials and tools.



Definition of Terms

Ampere - a unit of measure of electric current

Circuit - the path of electric current from the source to the components and goes back to the source

Kilowatt - a unit of power equivalent to 1000w

Conductor - a wire or a cord which provides path for current flow

Resistance - the quality of electric current measured in ohms that resist the flow of current

Hot wire - a wire through which current flows

Insulator – material used to cover electric wires which may be made from plastic, rubber, or asbestos

Tools - implements used to modify raw materials for human use

Corrugated plastic conduit (CPC) - commonly known as flexible non-metallic conduit or *modflex*

Metallic Conduits- metal raceways classified into four: rigid steel conduit (RSC), intermediate metallic conduit or tubing (IMC or IMT), electrical metallic conduit or tubing (EMC or EMT), and flexible metallic conduit (FMC)

Non-metallic conduits- plastic conduits or raceways designed to be a channel of wire that are classified as rigid non-metallic conduit or PVC, flexible non-metallic or CPC, and surface plastic molding

Connectors and Adapters - accessories that are used to connect boxes to conduits or raceways to the other boxes in the electrical system

LEARNING OUTCOME 1

Prepare electrical supplies, materials, and tools

PERFORMANCE STANDARDS

- Tools and materials are identified as per job requirement.
- Tools are classified according to their function as per job requirement.
- Materials are classified according to their uses in a specific project.
- Tools and materials are selected.



Materials/ Resources

- | | | |
|--------------------|-------------------------------------|-------------------|
| 1. Utility box | 8. Electrical Wires | 15. Switch Plates |
| 2. Connectors | 9. Corrugated Plastic Conduit (CPC) | 16. Cut-out Boxes |
| 3. Male Plug | 10. Receptacles | |
| 4. Fuse | 11. Fuse Panel/ Safety Switch | |
| 5. Junction Box | 12. Square Boxes | |
| 6. Conduits | 13. PVC Conduit | |
| 7. Circuit Breaker | 14. Switches | |

TOOLS:

- | | |
|----------------------------|-----------------------------|
| 1. Long Nose Pliers | 9. Hacksaw |
| 2. Stubby Screwdriver | 10. Diagonal cutting pliers |
| 3. Wire Stripper | 11. Half-round file |
| 4. Portable Electric Drill | 12. Round file |
| 5. Philips Screwdriver | 13. Spirit level |
| 6. Combination Pliers | |
| 7. Hammer | |
| 8. Electrician's Knife | |



What Do You Already Know?

Let us determine how much you already know about preparing electrical supplies, materials, and tools. Take this test.

Pretest LO 1

Directions: Read the statement carefully and identify what is being described or defined. Choose your answer from the words inside the box.

Long Nose Pliers	Circuit Breaker	Hammer
Electrician's Knife	Utility box	Portable Electric Drill
Philips Screwdriver	Connectors	Wire Stripper
Male Plug	Fuse Combination Pliers	Junction Box
Stubby Screwdriver	Conduits	

_____ 1. This is used for gripping, holding, and cutting electrical wires, cables, and even small nails. It is usually used by linemen in doing heavy tasks.

_____ 2. This is used for cutting and holding fine wires. It can reach tight spaces or small openings unlike other pliers and is also used in making terminal loops of copper wires.

_____ 3. This has a cross tip resembling a positive (+) sign. It is used to drive screws with cross slot heads.

_____ 4. This is a tool used in driving or pounding and pulling out nails.

_____ 5. This is a tool used for removing insulation of medium-sized wires ranging from gauge #10 to gauge #16.

_____ 6. This is a small drilling machine with a chuck capacity of ¼" to 3/8". It is used for making holes on metal sheets and concrete walls.

_____ 7. This comes in either Standard or Philips screwdriver with short shank or blade and shorted handle used to turn screws in tight spaces where standard screwdriver cannot be used.

_____8. This is used by linemen to remove insulation of wire and cables in low and high voltage transmission lines.

_____9. This is a device inserted to a convenience outlet to conduct electric current. A flat cord is attached to it on one end and the other end is connected to a current-consuming instrument or appliance.

_____10. This is a circuit protective device that automatically blows and cuts the current when an overload or short circuit happens.

_____11. This is a rectangular-shaped metallic or plastic (PVC) material in which flush-type convenience outlet and switch are attached.

_____12. These are electrical materials used as the passage of wires for protection and insulation.

_____13. These are used to attach metallic or non-metallic conduit to the junction or utility boxes.

_____14. This is a protective device used to automatically cut off the current when trouble in the circuit such as short circuit or overload occurs.

_____15. This is an octagonal-shaped electrical material where the connections or joints of wires are being done. It is also where the flush-type lamp holder is attached.

Now check your answers using the Answer Key. If you got 90-100% of the items correctly, proceed to the next Learning Outcome. If not, do the next activities to gain knowledge and skills required for mastery.



What Do You Need To Know?

Read information Sheet 1.1 carefully. Find out how much you can remember and how much you learned by doing Self-Check .

Information Sheet 1.1

Electrical Tools and Equipment

Electrical tasks can be accomplished systematically to save time, effort, and resources. Most of the work cannot be done using bare hands. To do the task, electrical tools or equipment are needed to perform the job. This lesson will discuss the function/use of each tool or equipment used in electrical wiring installations.

The following are common **electrical tools and equipment** needed in the installation of electrical wiring.


- I. **SCREWDRIVERS.** These tools are made of steel hardened and tempered at the tip used to loosen or tighten screws with slotted heads. They come in various sizes and shapes.



- A. **Standard/Flat Screwdriver.** The blade tip is wedge-shaped and resembles a negative (-) sign. This is used to drive screws with a single slot head.



B. **Philips Screwdriver.** This has a cross tip resembling a positive (+) sign. This is used to drive screws with cross slot heads.



C. **Stubby Screwdriver.** This comes in either Standard or Philips screwdriver with short shank or blade and a shorted handle used to turn screws in tight spaces where a standard screwdriver cannot be used.

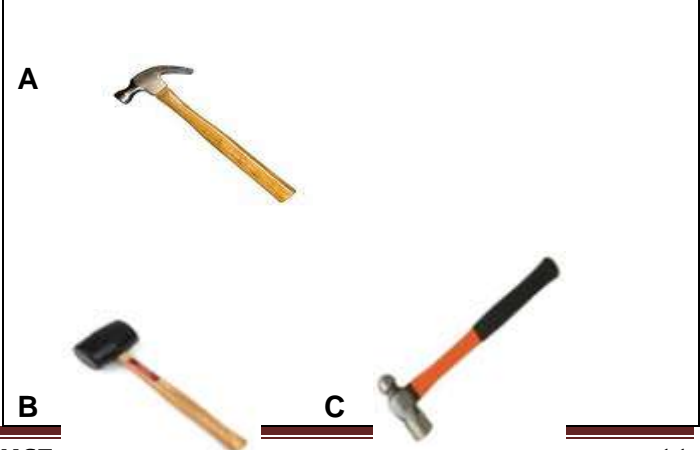


D. **Allen Screwdriver/Wrench.** This could be in the shape of a screwdriver or a wrench. Its function is to drive screws with hexagonal slot heads.



II. **HAMMERS.** These are tools used in driving or pounding and pulling out nails. They are made of hard steel, wood, plastic, or rubber. The following are types of hammers:

- A. Claw hammer
- B. Mallet(rubber head)
- C. Ballpeen hammer



III. **PLIERS.** These tools are made from metal with insulators in the handle and are used for cutting, twisting, bending, holding, and gripping wires and cables.



A. **Combination Pliers (Lineman's Pliers).** This is used for gripping, holding, and cutting electrical wires and cables and even small nails. They are usually used by linemen in doing heavy tasks.




B. **Side Cutting Pliers.** This type of pliers is used for cutting fine, medium, and big wires and cables.



C. **Long Nose Pliers.** This is used for cutting and holding fine wires. This can reach tight spaces or small openings where other pliers cannot reach and is also used in making terminal loops of copper wires.





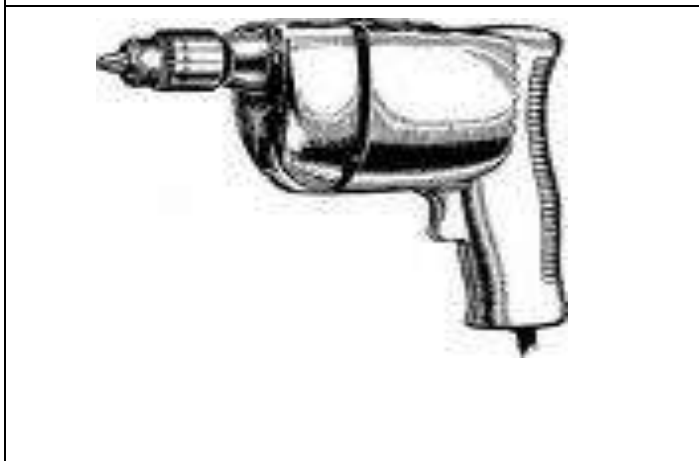
- IV. Wire Stripper. This is a tool used for removing insulation of medium-sized wires ranging from gauge #10 to gauge #16.



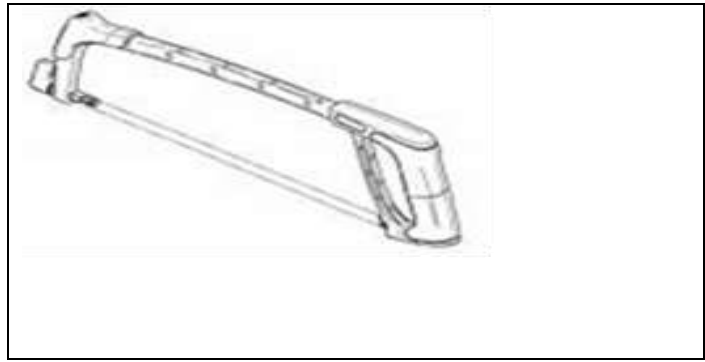
- V. Electrician's Knife. This is used by linemen to remove insulation of wire and cables in low and high voltage transmission lines.



- VI. Portable Electric drill. A small drilling machine with a chuck capacity of $\frac{1}{4}$ " to $\frac{3}{8}$ ". It is used in making holes on metal sheets and concrete walls.



- VII. Hacksaw. This tool is used to cut metal conduit and armored cable.










Electrical Supplies and Materials




Electrical materials are developed and constructed for a special purpose, such as to:





1. control the flow of current in an electrical circuit;
2. carry electrical current from the source to the load or current consuming apparatus;
3. hold and secure wires to its fixtures inside and outside houses and buildings; and
4. protect houses, buildings, appliances, and instruments from destruction and damage.

The following are the most commonly used electrical materials.

MATERIALS AND DESCRIPTION	PICTURES
<p>Convenience outlet- a device that acts as a convenient source of electrical energy for current consuming appliances. It is where the male plug of an appliance is inserted and is usually fastened on the wall or connected in an extension cord. It may be single, duplex, triplex, or multiplex and could be surface type or flush type.</p>	 Surface type (duplex)  Flush type (duplex)
<p>Male plug- a device inserted to a convenience outlet to conduct electric current. A flat cord is attached to it on one end and the other end is connected to a current-consuming instrument or appliance.</p>	 Male plugs

<p>Lamp holders- devices that hold and protect the lamp and are also called Lamp Sockets/Receptacles. These come in many designs and sizes. They are classified as flush, hanging (weather proof/chain), and surface types.</p>	 <p>Flush type Hanging (chain)</p>  <p>Surface type Hanging (weather)</p>
<p>Switch - a device that connects and disconnects the flow of electric current in a circuit. There are many shapes, designs, and types and they are classified as hanging, flush, and surface types.</p>	 <p>Surface type</p>  <p>Flush type Hanging type</p>
<p>Fuse - a circuit protective device that automatically blows and cuts the current when overload or short circuit happens.</p>	 <p>Knife blade Cartridge Plug type</p>

<p>Circuit Breaker - a protective device used to automatically blow and cut the current when trouble in the circuit such as short circuit or overload occurs.</p>	 <p>Circuit breaker</p>
<p>Junction Box - an octagonal shaped electrical material where the connections or joints of wires are being done. It is also where the flush type lamp holder is attached. This could be made of metal or plastic (PVC) <i>Polyvinylchloride</i>.</p>	 <p>Plastic</p> <p>Metal</p>
<p>Utility Box - a rectangular shaped metallic or plastic (PVC) material in which flush type convenience outlet and switch are attached.</p>	 <p>METAL</p> <p>PLASTIC</p>
<p>Flat Cord - a duplex stranded wire used for temporary wiring installation and commonly used in extension cord assembly. It comes in a roll of 150 meters and sizes of gauge # 18 and gauge # 16 awg (American wire gauge).</p>	 <p>Flat cord</p>

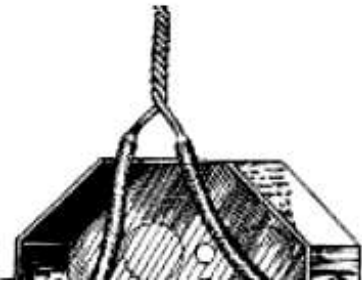
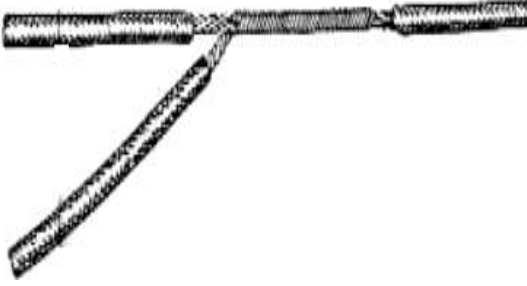

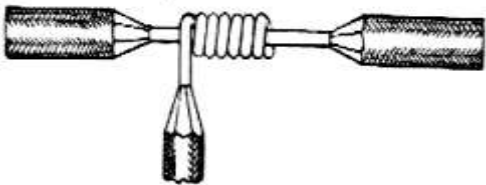

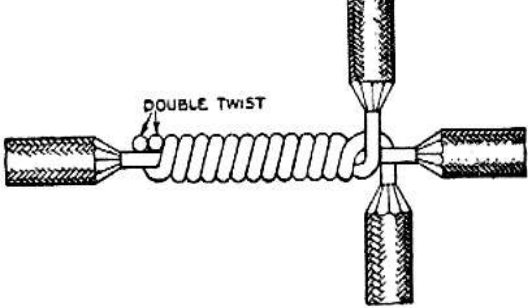
<p>Electrical Wire/Conductor- electrical material that could be:</p> <p>a. Stranded wire which is made of multiple strands joined together to make a single wire.</p> <p>b. Solid wire is made of a single strand of copper or aluminum wire. These are used in wiring installation inside and outside the buildings.</p>	 <p>a. Stranded wire</p> <p>b. Solid wire</p>
<p>Conduits/Pipes- electrical materials used as the passage of wires for protection and insulation. These could be rigid metallic, flexible metallic conduit (FMC), rigid non-metallic (PVC), and flexible non-metallic or corrugated plastic conduit (CPC).</p>	 <p>Metallic conduit</p> <p>Flexible Non-metallic conduit or corrugated plastic conduit (CPC)</p> <p>Rigid Non-metallic conduit (PVC)</p>
<p>Clamps- electrical materials used to hold and anchor electrical conduits to their proper position.</p>	 <p>Metal clamp Plastic clamp</p>
<p>Connectors- used to attach metallic or non-metallic conduit to the junction or utility boxes.</p>	 <p>Metal connector Flexible non-metallic connector</p>



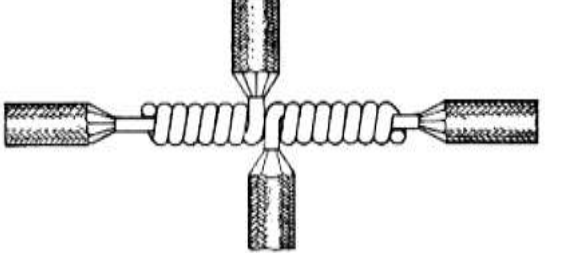

COMMON WIRE SPLICES AND JOINTS

Introduction

As a student in Electrical Installation and Maintenance, you should acquire the important knowledge and skills in wire splices and joints and be familiar with the actual application of every splice and joint. This will serve as your tool in performing actual wiring installation. Of course, another factor is the knowledge in interpreting and analyzing the wiring diagram especially if the circuit is complicated.

The following are common electrical wire splices and joints.

 <p>Rat Tail or Pig Tail. This kind of joint is commonly used to join two or more conductors inside the junction box. It is suitable for service where there is no mechanical stress when wires are to be connected in an outlet box, switch, or conduit fitting.</p>	 <p>Y-splice. This method of wrapping is generally used on small cables because the strands are flexible and can all be wrapped in one operation.</p>
 <p>Knotted tap. This is used where the tap wire is under heavy tensile stress.</p>	 <p>Plain tap joint. This is used where the tap wire is under considerable tensile stress circuit.</p>
 <p>Aerial tap. This is used as a temporary tap</p>	 <p>Duplex cross joint. This is a two-tap wire turned simultaneously and is used</p>

<p>usually done in constructions sites. The easy twist will facilitate tap wire movement.</p>	<p>where the two tap wire is under heavy tensile stress.</p>
 <p>Western Union Short-tie Splice. This is the most widely used splice or joint in interior wiring installation to extend the length of wire from one point to another.</p>	 <p>Western Union Long Tie. This is used extensively for outside wiring to extend the length of wire from one end to another.</p>
 <p>Cross joint. The same application is done as in plain tap but the only difference is that this tap is a combination of two plain taps placed side by side with each other.</p>	 <p>Wrapped Tap or Tee Joint. This is used on large solid conductors where it is difficult to wrap the heavy tap wire around the main wire.</p>

EXTENSION CORD

An **extension cord** is a span of flexible electrical power cable with a plug on one end and multiple sockets on the other end. It comes in several varieties to suit the needs of the user. One of the most important considerations is the power handling capacity to make it safe and functional.

Electrical gadgets are products of modern technology to make our life better. The number of electrical gadgets available at home and in offices may exceed the existing convenience outlets installed in every room. The best remedy to address the insufficiency of available outlets is to use an extension cord especially if the electrical gadgets need to operate at the same time.

REMINDER

Be careful in buying an extension cord. You have to look for the Department of Trade and Industry (DTI) markings. The Product Standard (PS) or Import Commodity Clearance (ICC) markings on it signify that the product passed the DTI standards for safety and quality.












Sample pictures of extension cords using different materials









How Much Have You Learned?

Self-Check 1.1

Direction. Identify each of the following tools/materials.

1.  _____
2.  _____
3.  _____
4.  _____
5.  _____
6.  _____
7.  _____
8.  _____
9.  _____

10.  _____
11.  _____
12.  _____
13.  _____
14.  _____
15.  _____

Refer to the Answer Key. What is your score?



How Do You Apply What You Have Learned?

Show that you learned something by doing this activity.

Operation Sheet 1.1

SKINNING OF WIRE USING DIFFERENT TOOLS AND EQUIPMENT

DIRECTIONS. Given are sets of tasks and their corresponding pictures. Practice those using appropriate tools and materials. Your performance will be judged using the following criteria:

PERFORMANCE RUBRICS:

CRITERIA	4	3	2	1
Accuracy				
Workmanship				
Proper handling of tools				
Speed				

Legend:

4- Excellent 3- Good 2- Fair 1- Poor

SCALE	DESCRIPTION	POINTS
4	Excellent	93-100
3	Good	86-92
2	Fair	79-85
1	Poor	78 and below




- **Accuracy-** the ability to follow the procedures/directions with precision
- **Workmanship-** the art, skill, and finality of work
- **Proper handling of tools-** the ability to apply proper handling of tools for a given task
- **Speed-** efficiency of work

TOOLS:

1. Combination pliers
2. Side cutting pliers
3. Long nose pliers
4. Wire stripper
5. Electrician's knife

MATERIALS:

Solid and stranded copper wires of different sizes: #14, #12, #10

Tasks	Pictures of the Tasks
1. Skin a wire about 1 to 1 ½ inches long using an electrician's knife.	
2. Skin a wire about 1 ½ inches long using combination and side cutting pliers. Make sure that there will be no knick (deep cut across the wire) on your skinned wires.	
3. Remove insulators about 1 to 1 ½ inches long using wire stripper.	

CONNECTING SKINNED WIRES TO WIRING MATERIALS

OBJECTIVE: To be able to properly connect skinned wires to bulb receptacles, convenience outlets, switches, or any other wiring materials.

TOOLS



1. Combination pliers
2. Side cutting pliers
3. Long nose pliers
4. Wire stripper
5. Electrician's knife
6. Phillips screwdriver
7. Flat screwdriver




MATERIALS:

- Electrical wires used in Activity 1.1

PROCEDURE:

Follow the procedure below

<p>1. Make terminal loops from your skinned wires of about 1 to 1 ½ inches long using long nose pliers.</p>	
<p>2. Connect the skinned wire to screw terminals of the bulb receptacle.</p> <p><i>*Be sure that the wire loop is connected or attached to the terminal screw in a clockwise direction.</i></p>	






<p>3. Attach the loop to the screw and tighten it to the convenience outlet tightly.</p> <p><i>*Be sure that the wire loop is connected or attached to the terminal screw in a clockwise direction.</i></p>	
<p>4. Insert the loop to the screw of the switch and tighten it.</p> <p><i>*Be sure that the wire loop is connected or attached to the terminal screw in a clockwise direction.</i></p>	
<p>5. Insert the loop to the screw of the fuse terminal and tighten it.</p> <p><i>*Be sure that the wire loop is connected or attached to the terminal screw in a clockwise direction.</i></p>	






Operation Sheet 1.2B

SPLICING OF WIRES


DIRECTIONS: Below are pictures of common wire splices and joints used in electrical wiring installations. Practice doing the task by following the steps given. Your performance will be judged using the rubric.

Steps in splicing a rat tail joint	
Steps	Figures

<p>1. Strip the wire insulator at the ends of the conductor to be joined at about 50 mm. Clean both wires to be joined.</p>	
<p>2. Place the two ends of bare wire in crossed position.</p>	
<p>3. Then, twist the bare conductors about five to seven times.</p>	
<p>Steps in splicing western union long- tie joint</p>	
<p>Steps</p>	<p>Figures</p>
<p>1. Strip the wire ends for about 75 mm.</p>	
<p>2. Place the wires in crossed position about mid-halfway from the insulation.</p>	

<p>3. Make four to six long twists of wires.</p>	
<p>4. Wrap each side of the wire for about four to five turns as shown.</p>	
<p>Steps in splicing aerial tap joint</p>	
<p>Steps</p>	<p>Figures</p>
<ul style="list-style-type: none"> Strip the tap wire end about 75 mm and the main wire end about 25 mm. 	
<ul style="list-style-type: none"> Place the wires in crossed position intersecting about 5 mm from the insulation of the tap wire and the main wire. 	
<ul style="list-style-type: none"> Bend the tap wire over the main wire, making a long twist. 	

- Turn the tap wire around the main wire making four to five turns.

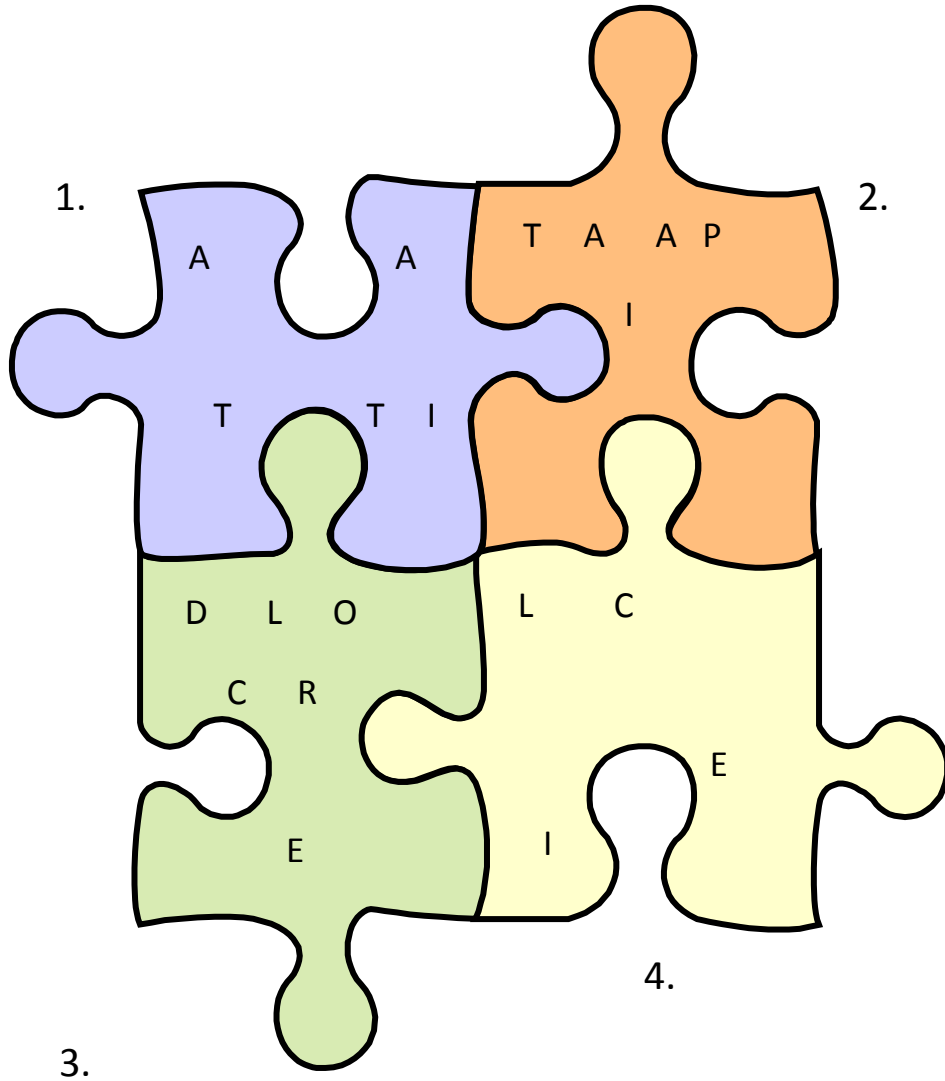




How Much Have You Learned?

Self-Check 1.2

A. Direction: Inside each piece of puzzle are jumbled letters. Arrange these letters to form the correct word on types of joints and splices/wire connections.



- 1. _____
- 2. _____
- 3. _____
- 4. _____



How Do You Apply What You Have Learned?

Show that you learned something by doing this activity.

Operation Sheet 1.3A

INTRODUCTION

Underwriter's knot is one of the skills needed in making an extension cord. It is neither a joint nor a splice but a **knot** that is made in an extension cord. Its purpose is to relieve the strain on small wires of the cord and binding screws of convenience outlets and male plug.

For you to make a quality and safe output you have to strictly follow the given procedure in making an underwriter's knot. Below is the procedure.

You will be rated using these rubrics.

PERFORMANCE RUBRICS:

CRITERIA	4	3	2	1
Accuracy				
Workmanship				
Proper handling of tools				
Speed				

Legend:

4- Excellent 3- Good 2- Fair 1- Poor

SCALE	DESCRIPTION	POINTS
4	Excellent	93-100
3	Good	86-92
2	Fair	79-85
1	Poor	78 and below






Materials:

- Flat cord no.18 AWG

Tools:

- Side cutting pliers
- Long nose pliers
- Combination pliers
- Wire stripper/electrician's knife

Procedure:

<p>1. Split the end of the flat cord about 8 centimeters long.</p>	
	<p>1. Bend the left strand of the cord and place it at the back of the main cord following the arrow.</p>
<p>2. Bend the right strand of cord. Place it at the back of the left strand and over the main cord.</p>	
	<p>3. Insert the right strand cord inside the loop made by the left strand cord.</p>
<p>4. Pull both strands of the flat cord to tighten the knot.</p>	

PROJECT PLAN IN MAKING AN EXTENSION CORD

INTRODUCTION

You might be wondering why there are several projects which are not completed. There are several reasons why this happens. It might be because of budget constraints or poor planning. This lesson will help you complete a project.

A **project plan** is necessary before undertaking any project because it serves as your guide in accomplishing an activity. It will give you an idea what needs to be done, how much to spend and what procedures to undertake.

A well prepared project plan saves time and cost of materials. Below is a sample project plan of an extension cord. This format can also be used in preparing a plan for other projects in the future.

Project Plan - (Making an extension cord)

Name of Student: _____ Year & Section: _____

I. Name of Project: Extension Cord Assembly Date Started: _____

Date Finished: _____

II. Objectives:

- a. Demonstrate how to make an extension cord
- b. Observe safety measures while doing the project

III. Sketch/Drawing:



IV. Materials Needed:

Qty.	Unit	Description	Unit Cost	Total Cost
1	pc.	Convenience Outlet (surface type duplex)	Php 40.00	Php 40.00
3	meters	Flat Cord # 18 AWG	Php 12.00	Php 36.00
1	pc.	Male Plug	Php 15.00	Php 15.00
2	pcs.	Eyelet Wire Connectors	Php 1.50	Php 3.00
TOTAL COST OF MATERIALS				Php 94.00
+ cost of labor (approximately 20%-30% of cost of materials)				Php 28.00 (30%)
SELLING COST				PHP 122.00

Sample Pictures of Materials Needed



Flat Cord



Male Plug



Eyelet Wire Connectors



Convenience Outlet

V. Tools and Equipment Needed:

1. Standard/Flat Screwdriver
2. Philips Screwdriver
3. Long Nose Pliers
4. Side Cutting Pliers
5. Electrician's knife/ Pocket Knife
6. Continuity Tester or Multi-tester

VI. Procedure:

1. Prepare the plan.
2. Gather all necessary materials, tools, and equipment needed.
3. Insert cord into the male plug. Split the cord wires about 8 centimeters long.
4. Remove insulation of both wires 1 centimeter long with a pocket knife as if sharpening a pencil. Be careful not to cut any strand.
5. Scrape bare wire with the back of the knife until shiny. Twist the wire stands.
6. Tie the underwriter's knot.

7. Make a loop on terminal wires and connect the wires to the screw of the male plug. The loop should go with the thread in a clockwise direction.
8. Split the cord wires at the other end about 4 centimeters long, then follow step no. 4.
9. Connect the wires to the connectors.
10. Open the convenience outlet then remove the screw.
11. Insert the wire connectors to the screws, tighten them and replace the cover.
12. Check the continuity and test the extension cord.



How Well Did You Perform?

**Find out by accomplishing the Scoring Rubric honestly and sincerely.
Remember it is your learning at stake!**

Criteria for Assessment:

PERFORMANCE RUBRICS:

CRITERIA	4	3	2	1
Accuracy				
Workmanship				
Proper handling of tools				
Speed				

Legend:

4- Excellent 3- Good 2- Fair 1- Poor

SCALE	DESCRIPTION	POINTS
4	Excellent	93-100
3	Good	86-92
2	Fair	79-85
1	Poor	78 and below

- **Accuracy**- the ability to follow the procedures/directions with precision
- **Workmanship**- the art, skill, and finality of work
- **Proper handling of tools**- the ability to apply proper handling of tools for a given task
- **Speed**- efficiency of work

LEARNING OUTCOME 2

Request appropriate supplies, materials, and tools for a specific job

PERFORMANCE STANDARDS

- Needed materials and tools are listed as per job requirement.
- Materials and tools are requested according to the list prepared.
- Requests are done as per company standard operating procedures (SOP).
- Unavailable materials and tools are substituted and provided without sacrificing cost and quality of work.



Materials / Resources

1. Inventory form
2. Requisition form
3. Job order form
4. Borrower's form



What Do You Already Know?

Let us determine how much you already know about requesting appropriate supplies, materials, and tools for a specific job. Take this test.

Pretest LO 2

Directions: Match the forms in **Column A** with the corresponding descriptions in **Column B**. Write the letter of your answer.

Column A	Column B
1. A document generated by a user department or storeroom personnel to notify the purchasing department of items needed, their quantity, and the time frame	_____ a. Inventory of Materials Form
2. The raw materials, work-in-process goods, and completely finished goods that are considered to be the portion of a business's assets that are ready or will be ready for sale	_____ b. Requisition Slip Form
3. A form used to request for tools and equipment to be used for a particular job. is a written instruction to perform a work	_____ c. Job Order/ Work Order Form
4. A written instruction to perform a task according to specified requirements, time frame, and cost estimates.	_____ d. Borrowers Form

Now check your answers using the Answer Key. If you got 90-100% of the items correctly, proceed to the next Learning Outcome. If you did not, do the next activities again to gain knowledge and skills required for mastery.



What Do You Need To Know?

Read the Information Sheet 2.1 very well then find out how much you can remember and how much you learned by doing Self-check 1.1.

Information Sheet 2.1

DIFFERENT TYPES OF FORMS

Correctness of the entries in different forms used in electrical work is necessary in order to acquire right, complete, and accurate number of materials and tools needed for a specific electrical job. Here are samples of different forms used in electrical work.

1. **Purchase requisition** is a document generated by a user department or storeroom personnel to notify the purchasing department about items it needs to order, their quantity, and the time frame. It may also contain the authorization to proceed with the purchase. This is also called *purchase request* or *requisition*.

REQUISITION SLIP FORM

Name:

Project:

Location:

Classification:

Purpose:

NO.	QUANTITY	UNIT	DESCRIPTION	UNIT COST	TOTAL COST

REQUISITIONER

TEACHER

HEAD

PRINCIPAL

2. **Inventory** are raw materials, work-in-process goods, and completely finished goods that are considered to be the portion of a business's assets that are ready or will be ready for sale. Inventory represents one of the most important assets that most businesses possess, because the turnover of inventory represents one of the primary sources of revenue generation and subsequent earnings for the company's shareholders/owners.

INVENTORY OF MATERIALS FORM

Name:

Section:

School:

Shop lab.:

Purpose:

Tools/ Equip- ment	Qty.	No. of Functional	No. of not Functional but Repairable	No. of Condemn- able	No. of Borrowed	No. of Missing

_____ _____ _____ _____
 REQUISITIONER TEACHER HEAD PRINCIPAL

Date: _____

4. **Borrower's Form** is a form used to request for tools and equipment needed for a particular job. It indicates the department the borrower is connected, with the date, the job that is to be done, the person who will approve the request, when it was returned, and if it was in good condition.

EQUIPMENT BORROWERS FORM
(Revised 31 August 2010; Accomplish in duplicate)

REQUEST NO: _____ (do not fill up this item) DATE: _____
MR / MS _____

(Please encircle) SURNAME GIVEN NAME MIDDLE

ADDRESS: CONTACT NO. E-MAIL ADDRESS:

Please check:

Student Student No. _____ Subject: _____

Dept Faculty Employee No. _____

Dept.
REPS/Staff Department College: _____

Others Office Address. _____

Accompanying DGE-TCAGP Member: _____

PURPOSE: _____

INTENDED PERIOD OF USE: _____ to _____ LOCATION: _____

CHECKLIST OF REQUESTED ITEMS *:

* If more than 8 items, provide another attachment.
** Do not fill this part; to be countersigned by authorized staff upon receipt and return.

RECOMMENDING APPROVAL (for DGE students): _____
Thesis Adviser/Faculty-in-Charge)

Borrower's Name in Print and Signature This is to certify that:

Date: _____ 1. I have read, understood, and agreed to the "Terms of
(Fill this portion only during the time of borrowing.) Use for AG&ST Equipment" (back of this page).

APPROVED: 2. I received the above listed equipment completely and
_____ in good order.

JUAN DELA CRUZ JR., Dr. Eng. 3 JR.. I swear to use the above listed equipment with due
AG&ST Lab Coordinator care and diligence.

APPROVED: 4. In case of damage or loss, I shall be responsible for
_____ repair or replacement:

JUAN DELA CRUZ JR., Dr. Eng. _____
Chair, DGE and Director, TCAGP (Borrower's Name over printed name)

To be accomplished upon return of equipment

Date returned: _____

All items in good condition? ____ YES ____ NO, (If no, please attach damage report)

Any missing item? ____ YES ____ NO, Please describe: _____

Received by: _____



How Much Have You Learned?

Self-Check 2.1

Directions: Accomplish the table.

COMMON TYPES OF FORMS	DESCRIPTION	PURPOSE
1.		
2.		
3.		
4.		

Refer to the Answer Key. What is your score?



How Do You Apply What You Have Learned?

Show that you learned something by doing this activity.

Activity Sheet 2.1

DRAMATIZATION/ROLE PLAY

OBJECTIVE:

To be able to understand and perform how to make requisition of supplies, materials, and tools for a specific job

Materials:

- Borrower's Slip/ Form
- Different electrical supplies and materials in the laboratory

Tools:

All available tools to be requested in the dramatization

Persons Involved:

Minimum of 3 students (1 will act as the tool keeper and the others are the borrowers)

Time limit:

7 to 10 minutes

LEARNING OUTCOME 3

Receive and inspect electrical supplies, materials, and tools

PERFORMANCE STANDARDS

- Received and inspected materials and tools as per quantity and specification based on requisition.
- Tools and materials are checked for damages and manufacturing defects.
- Materials and tools received are handled with appropriate safety devices.
- Materials and tools are set aside at an appropriate location nearest to the workplace.



Materials/ Resources

1. Sample of official receipt form
2. Delivery receipt form



What Do You Already Know?

Let us determine how much you already know about receiving and inspecting electrical supplies, materials, and tools. Take this test.

Pretest LO 3

Directions:

A. Complete the missing word to complete the three key words in receiving a shipment or supplies and materials:

1. Is it _____?
2. Is it _____?
3. Is the piece count _____?

B. Answer the following questions and write the correct answer on the space provided.

1. Who is responsible for requesting inspection of damaged goods and packaging? _____
2. What should you do with the copy of your request for inspection?

3. What should a person do with the findings of the inspection?

Now check your answers using the Answer Key. If you got 90-100% of the items correctly, proceed to the next Learning Outcome. If not, do the next activities to gain knowledge and skills required for mastery.



What Do You Need To Know?

Read the Information Sheet 3.1 very well then find out how much you can remember and how much you learned by doing Self-check 3.1.

Information Sheet 3.1

RECEIVING AND INSPECTING FREIGHT SHIPMENTS

One of the tasks of a supply officer or logistics officer is the purchase of the company's supplies, materials, and anything that the company needs. But this duty does not end in just purchasing but also in receiving the deliveries of what was purchased.

In receiving the deliveries, understand that you need to ensure that the right materials and supplies were delivered and all are in good condition without defects.

A. When you receive a shipment, ask the shipper the following questions:

1. **Is it for me?** Check the delivery receipt for the consignee's name and address. If your agency has more than one location, make sure the goods are for this exact address. Check the freight to see if it is the same as what is described on the delivery receipt. Look at the label on each item to make sure the shipment belongs to you.

2. **Is it damaged?** Do not sign the receipt before inspecting for damage. Check for holes, water, stains, and tears. Pick up cartons if you can. Check for rattling. Listen for something broken inside. Check to see if any package has been opened or if the sealing tape has been tampered with.
3. **Is the piece count correct?** Count the pieces and match the number on the delivery receipt to the number you have counted. If the shipment is on a pallet, check to make sure the pallet is solid with no voids inside the stack. If the shipment is shrink or stretch wrapped, make sure the wrap hasn't been cut and pieces removed. Sign only for the type of unit you receive. For example: two pallets. Don't sign for the number of packages that are supposed to be on the pallet. However, if time permits or the pallet is not banded or shrink wrapped, count the packages, and only then sign for the number of packages.

B. If your delivery doesn't check out, do one of the following:

1. Refuse shipment if it isn't yours, if the shipment does not meet the terms specified by your agency, or is damaged to the point where it no longer has a value.
2. If yours, and only partially damaged or short, accept it and note exceptions on the delivery receipt.

C. How to note exceptions:

1. **Damage Notations:** Be specific. Describe the damage accurately. Pinpoint the locations of all defects. If you can see the damage, have the driver wait while you open and inspect the packages. Write down the number and identity of the damaged pieces. This is called a "joint inventory."
2. **Shortage Notations:** If part of shipment is missing, write the number of pieces actually delivered on the delivery receipt and circle it. Then write down the number of pieces missing and note them as "short."
3. **Signatures:** Write down all exceptions on both copies of the delivery receipt. Have the driver sign both copies of the delivery receipt in his full name (not initials or nicknames). After the driver signs, you sign also. Write your agency's name, your full name, the date, and the time of day.

D. Follow these steps when requesting an inspection:

1. The receiving person is responsible for requesting the carrier to inspect the damaged goods and packaging. The formal request should be made by phone right after discovering any loss or damage.
2. After the phone request, make a request for inspection by the carrier in writing. Note the date and time of your previous phone call and the person contacted. Keep a copy of your request letter on file.

3. Once contacted about damage or shortage, the carrier may waive inspection and tell you so. If so, write down the name of the person who waived the inspection, and the date and time of waiver. Then conduct your own detailed inspection. Write up your findings in a report and attach it to the file. If you can, take photographs to confirm your inspection report.



How Much Have You Learned?

Self-Check 3.1

- a. Complete the missing word to complete the **three key words** in receiving a shipment or supplies and materials:

1. Is it _____?
2. Is it _____?
3. Is the piece count _____?

- b. Answer the following questions and write the correct answer on the space provided.

1. Who is responsible for requesting inspection for damaged goods and packaging? _____
2. What should you do with the copy of your request for inspection?

3. What should a person do with the findings of the inspection?

Refer to the Answer Key. What is your score?



How Do You Apply What You Have Learned?

Show that you learned something by doing this activity.

Activity Sheet 3.1

DRAMATIZATION ON RECEIVING SUPPLIES, MATERIALS, TOOLS, AND EQUIPMENT

I. OBJECTIVE

To practice how to receive and inspect supplies and materials for a specific job

II. PERSONS INVOLVED

1 student to act as supply officer/ tool and 1 student to act as delivery personnel

III. SITUATION

The delivery man arrived to deliver the electrical supplies and materials. The supply officer (the other student) will inspect before receiving the supplies and materials.



Congratulations! You did a great job! Rest and relax a while then move on to the next lesson. Good luck!

REFERENCES

- Philippine Electrical Code. 2000 Edition.
- Cardenas, Elpidio.1989, Fundamental and Elements of Electricity. Philippines: national Bookstore.
- <http://sam.dgs.ca.gov/TOC/3800/3861.htm>
- <http://electrical.about.com/od/electricaltools/tp/top16electricaltools.htm>

LESSON 2

Performing Mensuration and Calculation



LEARNING OUTCOMES:

At the end of this lesson, you are expected to do the following:

- LO 1. select measuring tools and instruments; and
- LO 2. carry out measurements and calculations.



Definition of Terms

Amperage (Amps) - a unit of measurement of electrical current flow

Ampere - a unit of measurement which describes the amount of electric current passing a certain point at a particular time

Centimeter – one hundredth of a meter

Inch - a portion of a foot, which is an English unit of linear measurement

Megger - an instrument used to measure the insulation resistance of conductors or wire. It gives measurement in ohms or meg-ohms

Millimeter - one-thousandth of a meter

Multi-tester - an electrical measuring instrument used to measure the voltage, the resistance, or the current of a circuit. It is connected either through parallel or series with the circuit depending on what to measure.

Ohm - the unit of measurement used to express resistance

Ohmmeter - an instrument used to measure resistance in ohms

Volt - a unit of measurement of electrical pressure or voltage

Voltmeter - an instrument specially designed for measuring voltage

Wire Gauge - used to measure the diameter of magnetic wire

LEARNING OUTCOME 1

Select Measuring Tools and Instruments

PERFORMANCE STANDARDS

- Measuring tools and instruments are selected/ classified as per object to be measured according to job requirements.
- Measurements are obtained according to job requirements.
- Computation of resistance, current, and voltage using Ohms Law are obtained.



Materials/ Resources

1. Ruler
2. Push-pull tape rule
3. Multi-meter
4. Zigzag rule
5. Wire gauge
6. Micrometer caliper
7. Vernier caliper
8. Activity Sheets








What Do You Already Know?

Let us determine how much you already know about selecting measuring tools and instruments. Take this test.

Pretest LO 1

- I. **Directions:** Match the electrical measuring tools and instruments in **Column A** with their descriptions in **Column B**. Write the letter of your answer in the space provided.

Column A	Column B
____ 1. 	A. Voltmeter
____ 2. 	B. Volt-ohmmeter
____ 3. 	C. Micrometer
____ 4. 	D. Clamp Ammeter
____ 5. 	E. Wire gauge

II. Multiple Choice

Directions: Choose the letter of the object being described and write it on your answer sheet.

1. An instrument used to measure the amount of electrical current intensity in a circuit
 - a. Voltmeter
 - b. Ammeter
 - c. Micrometer
 - d. Ohmmeter
2. A pocket-sized tool used to test the presence of current in a line wire or circuit
 - a. Test light
 - b. Wire gauge
 - c. Ruler
 - d. Pull-push rule
3. A measuring tool used to measure the length of an object in centimeters and inches
 - a. Test light
 - b. Wire gauge
 - c. Ruler
 - d. Pull-push rule
4. It is used to measure the diameter of wires/conductors in circular mills. It can measure small and big sizes of wires and cables.
 - a. Voltmeter
 - b. Ammeter
 - c. Micrometer
 - d. Ohmmeter
5. It is used to measure the voltage, resistance, and current of a circuit. It connected in parallel or series with the circuit depending on what to measure.
 - a. Volt-Ohm-Millimeter
 - b. Micrometer
 - c. Ohmmeter
 - d. Ammeter

Now check your answers using the Answer Key. If you got 90-100% of the items correctly, proceed to the next Learning Outcome. If not, do the next activities to gain knowledge and skills required for mastery.



What Do You Need To Know?

Read the Information Sheet 1.1 very well then find out how much you can remember and how much you learned by doing Self-check 1.1.



Information Sheet 1.1

MEASURING TOOLS AND INSTRUMENTS

Measurement is the process or the result of determining the **ratio** of a **physical quantity**, such as a length, time, temperature, etc., to a **unit of measurement**, such as meter, second or degree Celsius. The science of measurement is called **metrology**.

The English word *measurement* originates from the **Latin** *mēnsūra* and the verb *metiri* through the **Middle French** *measure*.

Electrical measuring tools and instruments are sensitive and delicate so extra care is necessary in handling them. These are used to measure currents, voltages, resistances, wattages, and other important elements in electrical works. This topic will tackle the function/use of each measuring tool and instrument used in doing an electrical task. Different kinds of measuring tools and precision measuring instruments are as follows:

Measuring tool/instrument	Description
	Test Light is a pocket-sized tool used to test the presence of current in a line wire or circuit.
	Micrometer is used to measure the diameter of wires/conductors in circular mils. It can measure small and big sizes of wires and cables.



Wire Gauge is used in determining the size of wires/conductors. The gauge ranges from 0 to 60 awg (American wire gauge).



Ruler/foot rule is a measuring tool used to measure length, width, and thickness of short flat objects and to draw straight lines







**A ruler/rule is a tool used in, for example, geometry, technical drawing, engineering, and carpentry, to measure lengths or distances or to draw straight lines. Strictly speaking, the ruler is the instrument used to draw straight lines and the calibrated instrument used for determining length called a measure. However, common usage calls, both instruments rulers and the special name straight edge is used for an unmarked rule.*



Pull-Push Rule is a measuring tool used to measure the length of an object in centimeter and inches.



	<p>Ammeter is an instrument used to measure the amount of electrical current intensity in a circuit. The unit of measure is ampere (a). It is connected along or series to the circuit.</p>
	<p>Voltmeter is an instrument used to measure the electrical pressure or voltage of a circuit. The unit of measure is volt (v). This is connected across or parallel to the circuit.</p>
	<p>Clamp Ammeter is also called tong-tester. It is used to measure the current flowing in a conductor. It is clamped or hung in a conductor.</p>
	<p>Volt-Ohmmeter (VOM) also called multi-tester, is used to measure the voltage, resistance, and current of a circuit. It is connected in parallel or series with the circuit depending on what to measure.</p>



How Much Have You Learned?

Self-Check 1.1

Text Twist:

A. Directions: Inside **Box A** are jumbled letters. Arrange the letters to form words pertaining to electrical measuring tools and instruments. Write the words inside **Box B**.

Box A

Box B

1. GEWIGREAU

2. MVLTETEOR

3. AACMPLMMTREE

4. RPPULLUSHULE

1.

2.

3.

4.

B. Directions: Describe at least two of your answers in activity A.

1. _____

2. _____

Refer to the Answer Key. What is your score?



How Do You Apply What You Have Learned?

Show that you learned something by doing this activity

Activity Sheet 1.1

Directions: Using a pull-push rule, measure the length, width, and thickness/height of the teacher's table and blackboard eraser. Write your answer inside the corresponding box.

Object to be Measured	Length Measurement		Width Measurement		Thickness/Height Measurement	
	Inches	Centi-meters	Inches	Centi-meters	Inches	Centi-meters
1. Teacher's table						
2. Blackboard eraser						
3. Teacher's cabinet						
4. Classroom door						

LEARNING OUTCOME 2

Carry out measurements and calculations

PERFORMANCE STANDARDS

- Numerical computations are self-checked and corrected for accuracy.
- Accurate measurements are obtained according to job requirements.
- Identified and converted systems of measurements to job requirements.
- Work pieces are measured according to job requirements.



Materials

1. Paper
2. Ball pen
3. Ruler
4. Push-pull tape
5. Steel rule
6. Activity Sheets



What Do You Already Know?

Let us determine how much you already know about carrying out measurement and calculations. Take this test.

Pretest LO 2

A. Directions: Write the equivalent value of the given unit.

1. 1 cm is _____ mm
2. 1 yard is _____ inches
3. 1 dm is _____ cm
4. 10 mm is _____ cm
5. 1 foot is _____ inches

B. Directions: Write the correct unit abbreviation of the following:

_____ 1. Centimeter

_____ 2. Meter

_____ 3. Decimeter

_____ 4. Yard

_____ 5. Feet

C. Directions: Convert the following:

1. 10 feet = _____ cm

2. 70 cm = _____ mm

3. 15 inches = _____ ft

4. 5 meters = _____ yard

Now check your answers using the Answer Key. If you got 90-100% of the items correctly, proceed to the next Learning Outcome. If not, do the next activities to gain knowledge and skills required for mastery.



What Do You Need To Know?

Read the Information Sheet 2.1 very well then find out how much you can remember and how much you learned by doing Self-check 2.1.

Information Sheet 2.1

SYSTEM OF MEASUREMENT

A **system of measurement** is a set of units which can be used to specify anything can be measured.

These are common units of measurement used in making layout and installation of electrical materials:

A. Linear measures

1. **English system** provides the creative way on how people can measure by themselves. For example, people measure shorter distance on the ground with their feet. They measure long distances by their palms which is equal to a yard.

- Inch
- Yard
- Miles

2. **Metric system** is a decimalized system of measurement. It exists in several variations with different choices of base units. Metric units are widely used around the world for personal, commercial, and scientific purposes.

- Millimeter
- Centimeter
- Decimeter
- Meter

B. English units and equivalent

- 12 inches = 1 foot (ft)
- 1 foot = 3 yards (yd)
- 1 yard = 36 inches

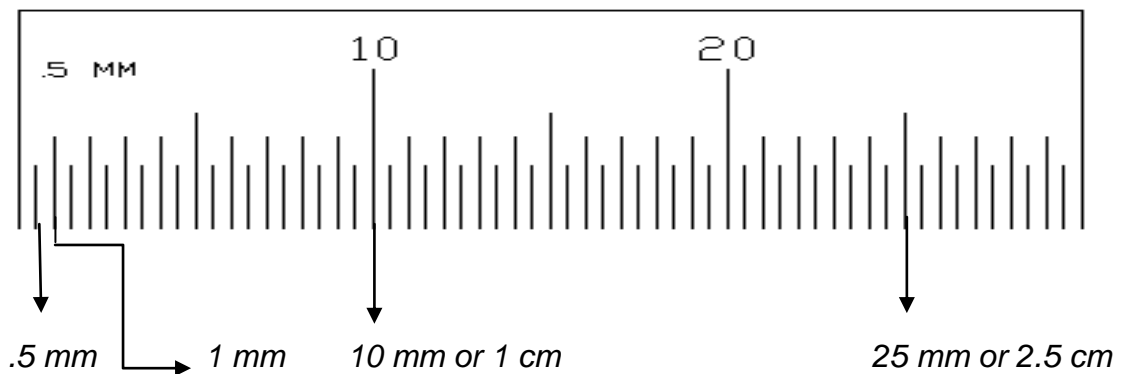
C. Metric units and equivalents

- 10 millimeters = 1 centimeter (cm)
- 10 centimeters = 1 decimeter (dm)
- 10 decimeters = 1 meter

D. English to metric equivalents

- 1 inch = 2.54 cm
- 1 foot = 30.48 cm
- 1 yard = 91.44 cm

E. The centimeter graduation



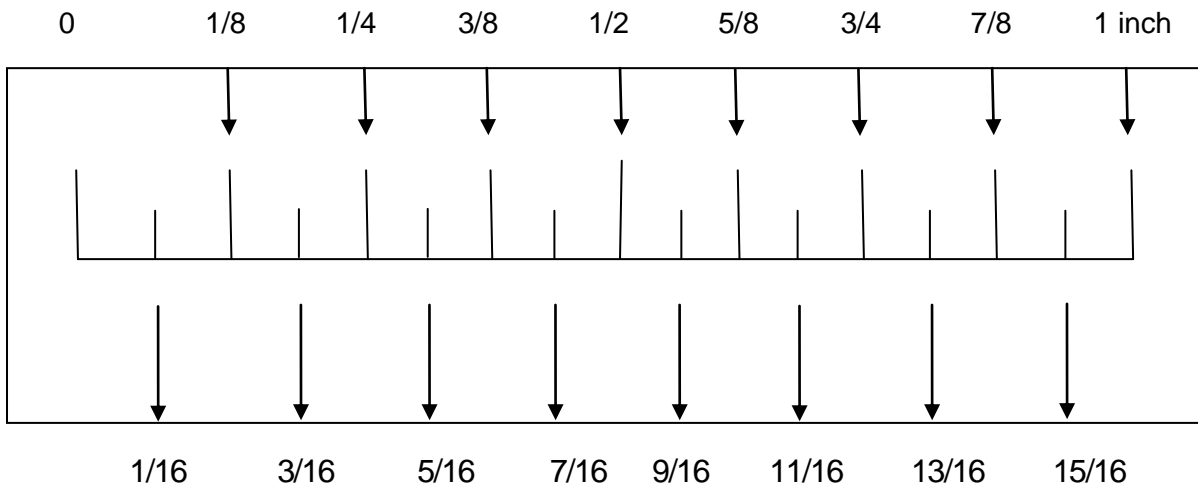
The graduation shows that every digit is .5 mm

How to read the cm graduation:

1. First graduation is .5 mm
2. Second graduation is 1 mm
3. Third graduation is 1.5 mm
4. Fourth graduation is 2 mm

Note: If the graduation reaches 10 mm, it is equivalent to 1 cm.


F. The inch graduation



How to read the inch graduation:

1. First graduation is $\frac{1}{16}$ inch
2. Second graduation is $\frac{1}{8}$ inch
3. Third graduation is $\frac{3}{16}$ inch
4. Fourth graduation is $\frac{1}{4}$ inch, then follow the given scale above.

The inch graduation in a steel rule:



Converting the unit of measurement from English to metric and vice versa

Example:

1. 12 inches = _____ cm

Since

$$12 \text{ inches} = 2.54 \text{ cm}$$

$$\frac{\quad}{1 \text{ inch}}$$

$$12 \times 2.54 \text{ cm}$$

Cancel the common unit and apply cross multiplication.

Perform the indicated operation.

$$\frac{\quad}{1}$$

Therefore: 12 inches = 30.48 cm

2. 6 feet = _____ inches

Since

~~6 feet~~ = 12 inches

$$\frac{\quad}{1 \text{ feet}}$$

$$\frac{6 \times 12 \text{ inches}}{1}$$

Therefore: 6 feet = 72 inches

THE MULTITESTER

INTRODUCTION

The **Multitester** or **multimeter** is sometimes called the VOM (voltmeter, ohmmeter, milliammeter). It is an instrument that can measure voltage, resistance, and current. It is generally made of two types: the analog and the digital.

A. PARTS OF A MULTITESTER



POINTER. The needle-shaped rod that moves over the scale of a meter.

Pointer. It is mechanically connected to the moving coil. It indicates the measured values on the multimeter scale.

RANGE SELECTOR KNOB (Selector switch) makes it possible to select different functions and range of the meter.



Adjustment screw makes it possible to adjust the pointer to the zero position of the scale.



SCALE is a series of markings used for reading the value of a

SCALE can have different types of scale, for voltage and current readings the scales have mostly **linear** which means equal division. For resistance



Test probe positive (red) negative (black) is used to connect the circuit to the electrical components being tested

Zero-ohm adjusting knob is used to zero-in the pointer before measuring resistance.

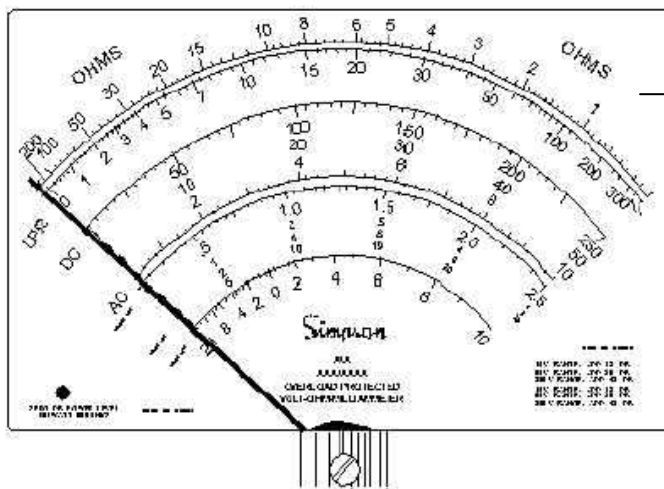
A. Proper care and maintenance of the multimeter

1. Read manual of instructions on how to operate the multimeter.
2. In reading the amount of voltage, always start with the highest range to avoid reading voltage higher than the tester setting.
3. Be sure that the tester is set to the correct range setting: resistance range when measuring the ohm, voltage range when measuring voltage and ammeter range when measuring the value of electric current.
4. Always check the condition of its battery. Worn out batteries will damage the internal setting of the tester.
5. When the tester is not in use or will be stored, set the selector switch to 1000V or to OFF position.
6. Never drop the tester.

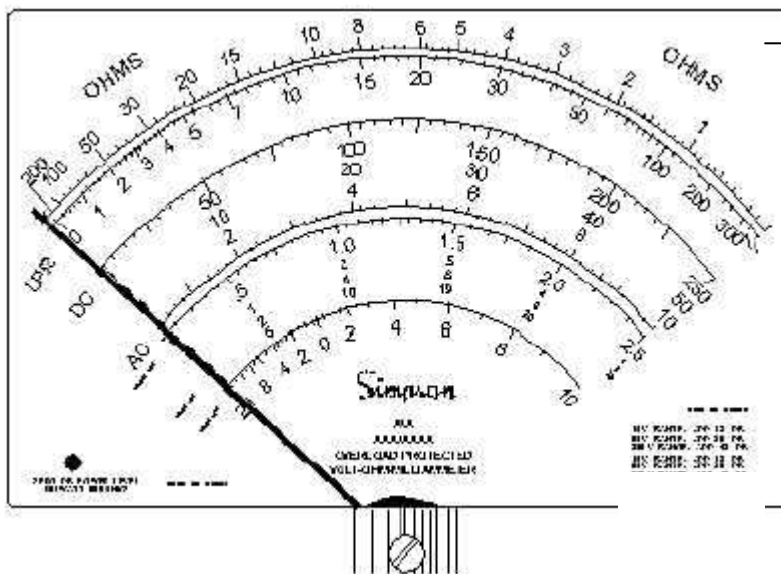
B. How to read the meter scale of the multitester

To read the resistance range of the multi-tester, the table below will be used. The unit of measurement to be used to determine its resistance is **ohm**.

Range	0-2	2-10	10-20	20-50	50-100	100-200
Range x1	0.2	0.5	1	2	5	20
Range x10	2	5	10	20	50	200
Range x1k	20	50	100	200	500	2K
Range x 10k	200	500	1K	2K	5K	20K



Pointer deflection
Range setting is X1
Reading is 2.5 ohms

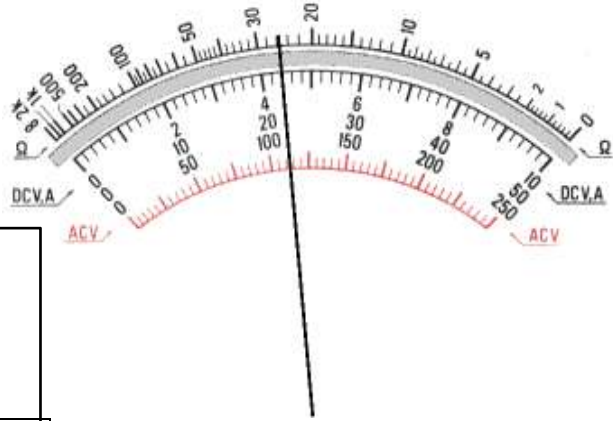


Pointer deflection
Range setting is X10
Reading is 25 ohms

Voltage scale

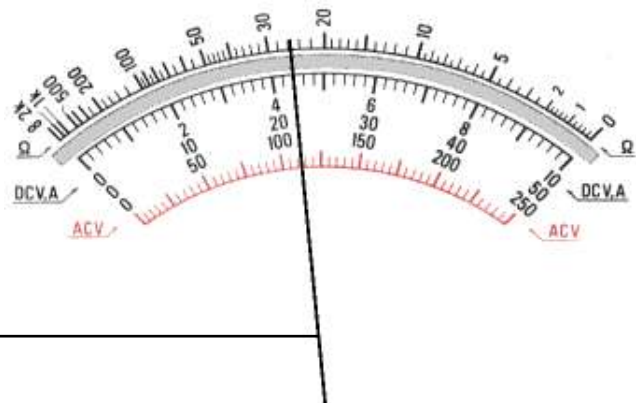
Range	Value/div
Range 10V	0.2V
Range 50V	1V
Range 250V	5V
Range 100V	20V

Voltage scale
 Range setting is 10 V
 (used 0-10 scale)
 Reading is 4.4V



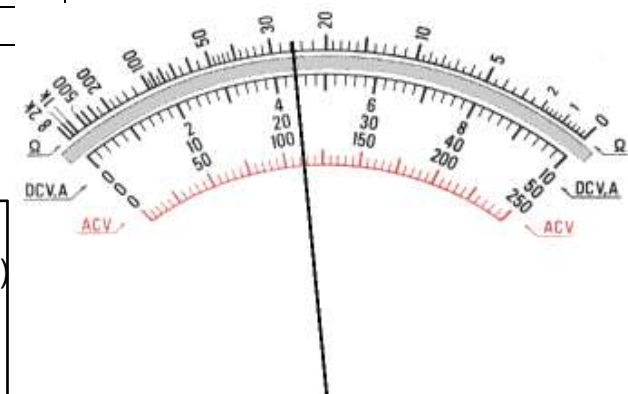
Range	Value/div
Range 10V	0.2V
Range 50V	1V
Range 250V	5V
Range 100V	20V

Voltage scale
 Range setting is 50V (used 0-10 scale)
 Reading is 24V



Range	Value/div
Range 10V	0.2V
Range 50V	1V
Range 250V	5V
Range 1000V	20V

Voltage scale
 Range setting is 250V (used 0-10 scale)
 Reading is 110V



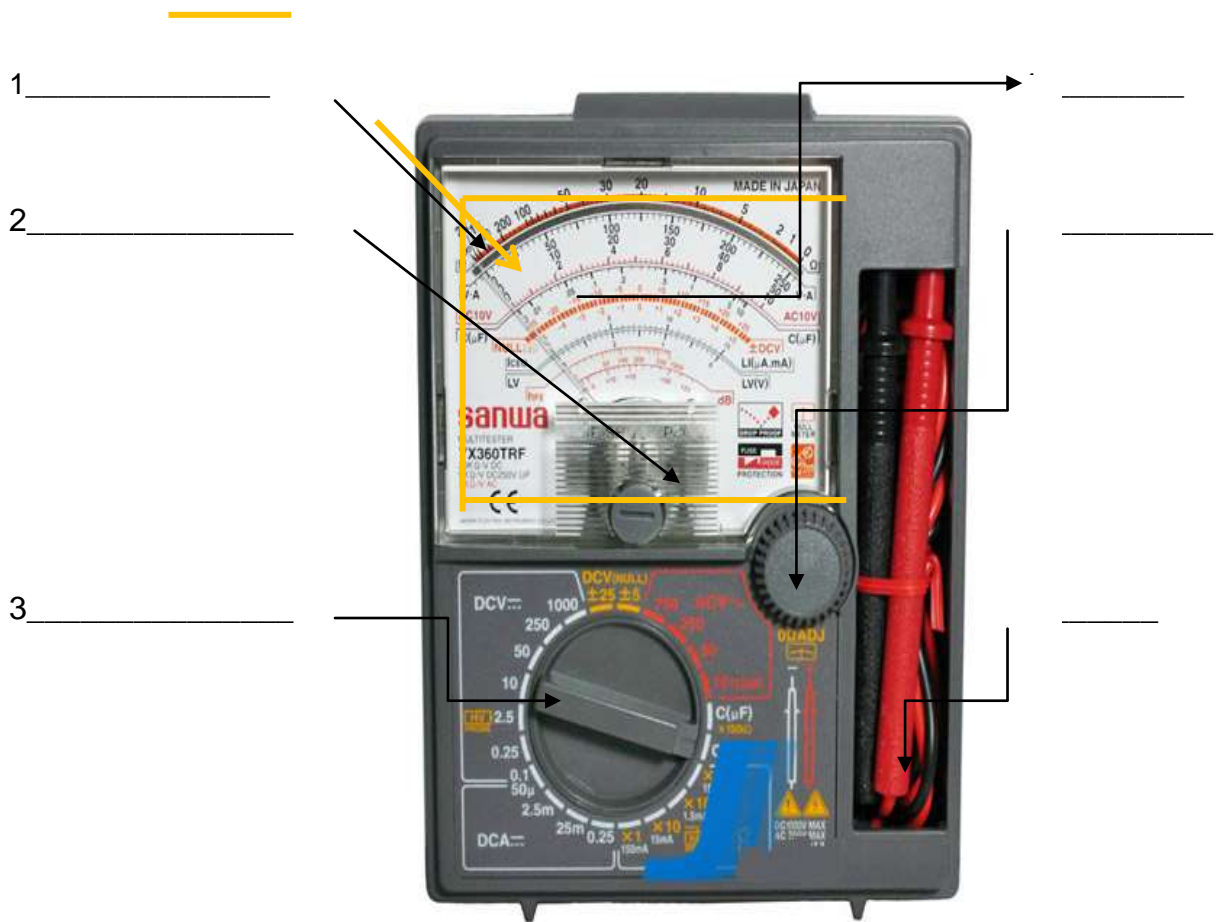


How Much Have You Learned?

Self-Check 2.1

PARTS OF A MULTITESTER

A. **DIRECTIONS.** Given a Multitester below, write the parts indicated by the arrow and give their functions.



Refer to the Answer Key. What is your score?



How Do You Apply What You Have Learned?

Show that you learned something by doing this activity

Job Sheet 2.1

I. USE MEASURING TOOLS

Supplies and Materials

- Sheet of paper
- Pencil

Tools and Equipment

- Steel rule
- Bench rule
- Metric rule
- Foot rule

Directions: Using any of the given measuring tools, read the actual measurement of the given samples. Write your answer on the space provided.

Sample	Actual measurement in centimeter
Teacher's Table	
Length of eraser	
Height of cabinet	

II. READING A VOLTMETER

Directions: Indicate the voltage reading of the voltmeter below.

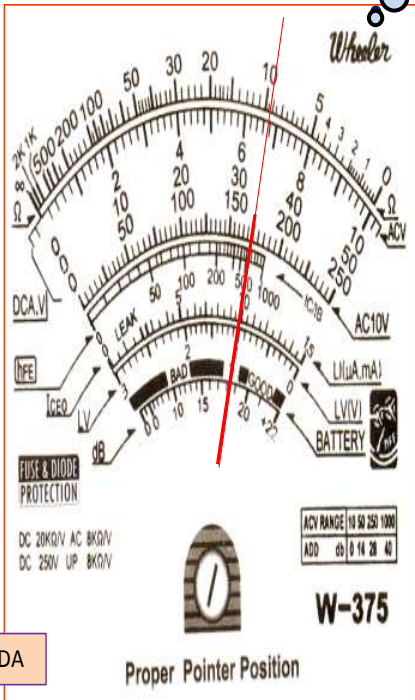
Write your answer on the space provided.

1. _____ VOLT


AC/DC

Vhe

What is the reading?

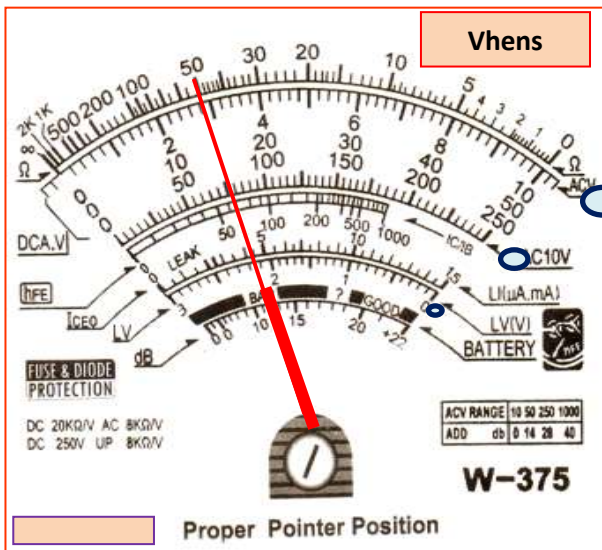


PANIDA



10

2. _____ VOLTS



What is the reading?



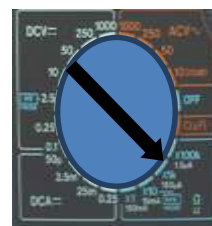
1000 ACV

III. READING AN OHMMETER

Direction: Indicate the resistance reading of the ohmmeter below. Write your reading at the space provided.

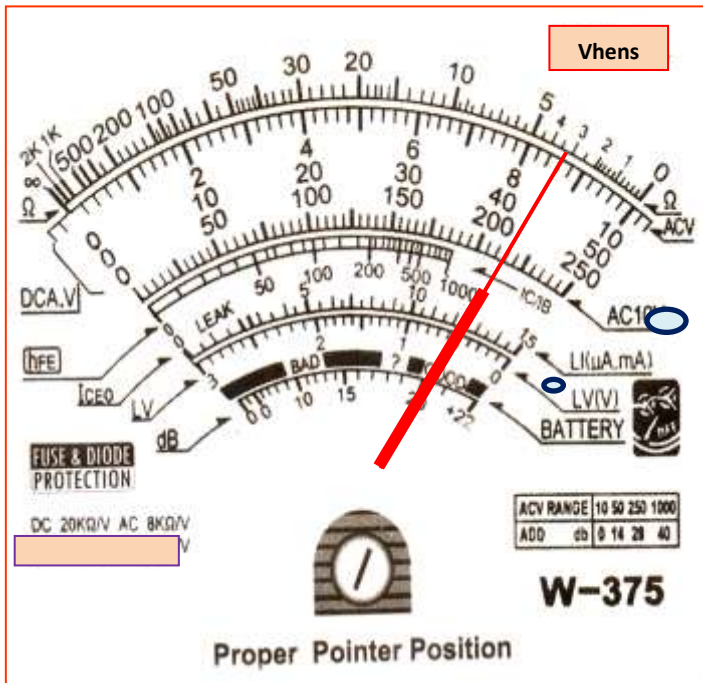


What is the reading?



Rx1k

1. _____ OHMS

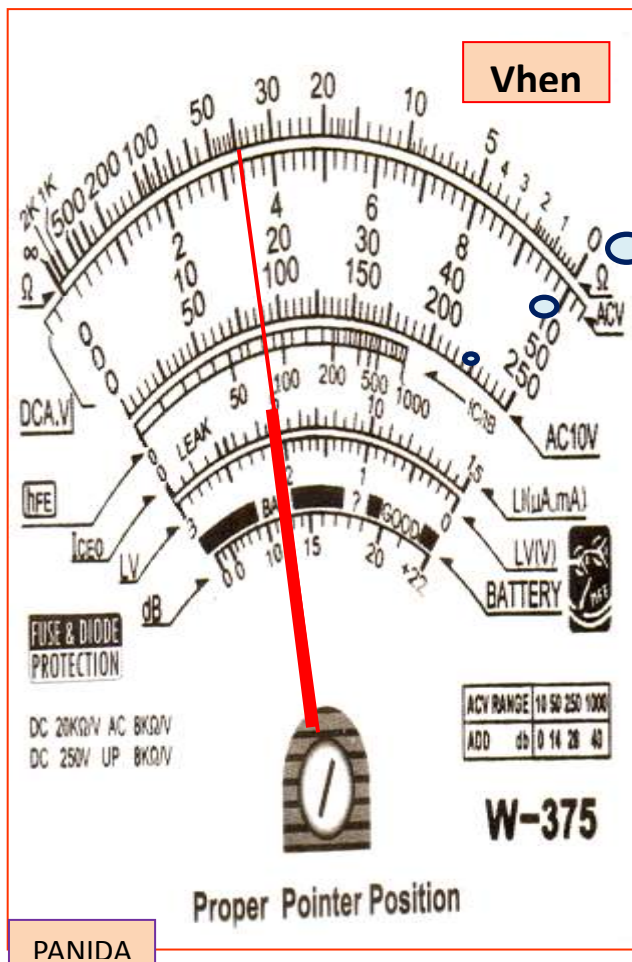


What is the reading?

Rx1



2. _____ OHMS

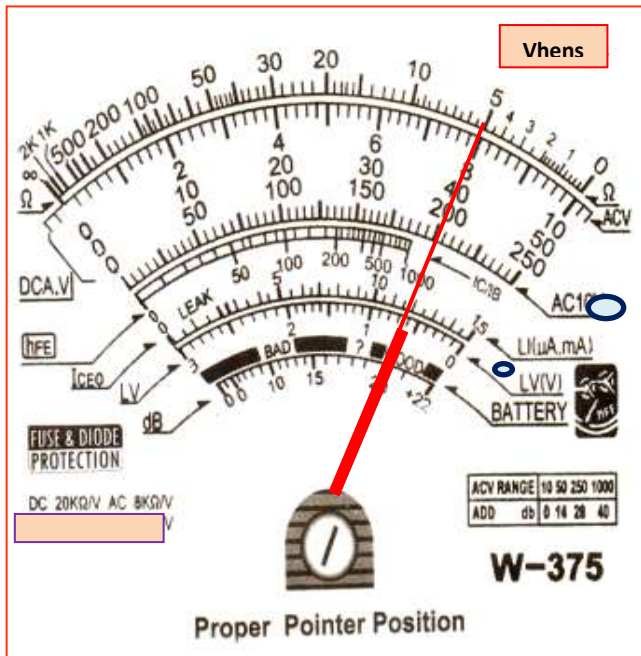


What is the reading?

Rx1k



3. _____ OHMS



What is the reading?



Rx1



4. _____ OHMS

IV. ACTUAL READING OF VOLTMETER AND OHMMETER

Directions: Using a volt-ohmmeter, measure the voltage of existing convenience outlets inside your room, voltage of a dry cell/battery, and resistance of resistors. Write your answer in the space provided.

Device/Component to be Measured	First	Second	Third
1. Voltage of the outlets	volts	volts	volts
2. Voltage of a dry cell/battery	volts	volts	volts
3. Resistance of resistors	ohms	ohms	ohms



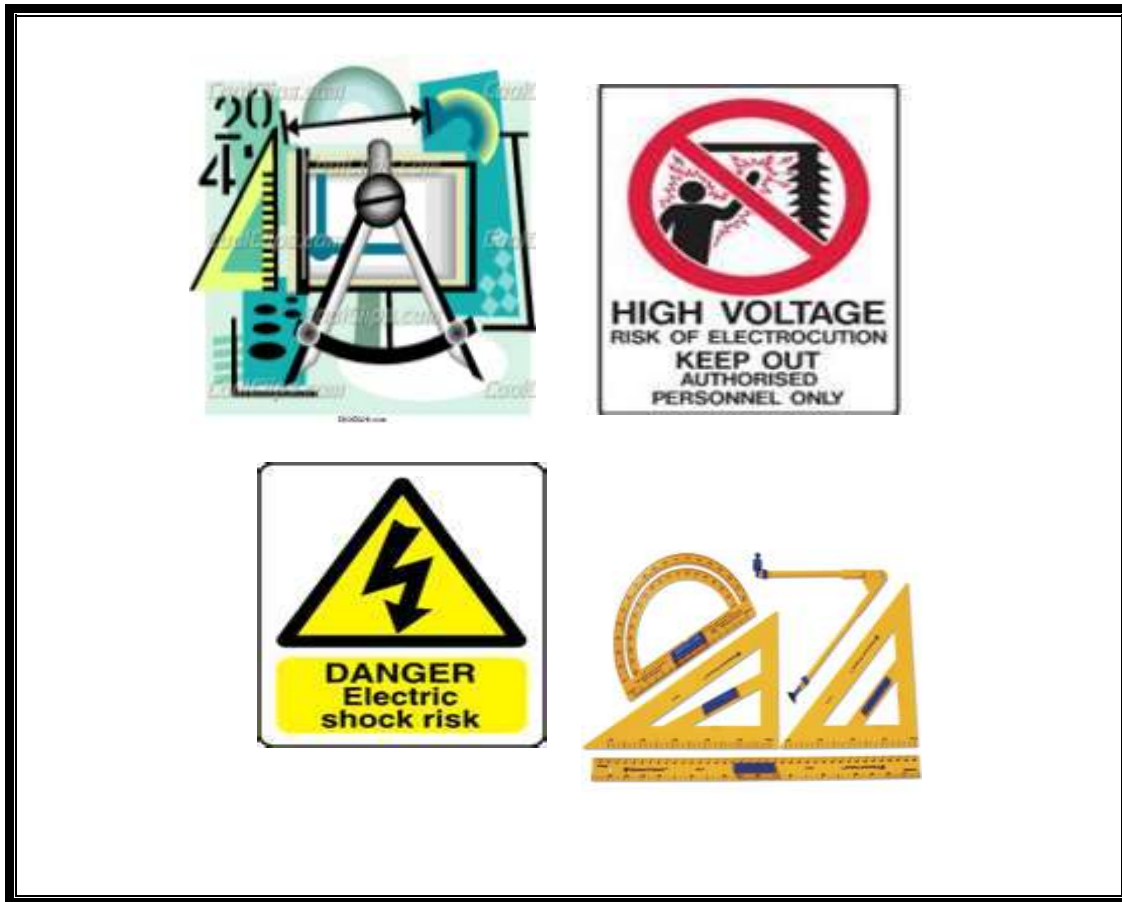
Congratulations! You did a great job! Rest and relax a while then move on to the next lesson. Good luck!

REFERENCES

- Philippine Electrical Code. Year 2000 Edition.
- Cardenas, Elpidio. 1989, Fundamental and Elements of Electricity. Philippines: National Bookstore.
- Enriquez, Michael Q., Gantalao, Fred T. and Lasala, Rommel M. 2004, Simple Electronics. Philippines: Andes Mountain Printers.
- Velasco, Benjamin S. 1994, Electronic Components Testing Simplified. Philippines: National Bookstore: 1994.
- <http://sam.dgs.ca.gov/TOC/3800/3861.htm>
- <http://electrical.about.com/od/electricaltools/tp/top16electricaltools.htm>

LESSON 3

Interpret Technical Drawings and Plans



LEARNING OUTCOMES:

At the end of this lesson, you are expected to do the following:

- LO 1. analyze signs, symbols, and data; and
- LO 2. interpret technical drawings and plans.



Definition of Terms

Ampere (I) - the unit of electrical current (coulombs per second)

Caution - indicates some precautionary measures against potential hazardous situations which, if not avoided, may result to a minor or moderate injury

Danger - specifies hazardous situation which, if not avoided, will result in serious injury or even death

Isometric - a kind of drawing which shows the object in 3 dimensional views

Joule (J) - a metric unit of energy: watt per second. 1 Kw hr = 2,655,000 ft-lb = 1.341 hp-hr = 3413 Btu = 3,600,000 joules

Kilovolt-ampere (KVA) - a measurement of apparent electric power

Kilowatt hour (Kwhr) - a unit of electrical energy or work performed

Ohm - the unit of electrical resistance (volts/ampere)

Orthographic - a drawing which shows the front top and side view of the object

Volt (V) - the unit of electric pressure or electromotive force which will produce a current of 1 ampere through a resistance of 1 ohm

Watts (W) and **kilowatts (KW)** - are units of electric power

LEARNING OUTCOME 1

Analyze signs, symbols, and data

PERFORMANCE STANDARDS

- Electrical symbols and signs are identified according to job specifications.
- Electrical symbols and signs are determined according to classification or as appropriate in drawing.



Materials/ Resources

1. Oslo paper
2. Drawing pencil
3. Ruler
4. Black pen
5. Electrical symbols
6. Various company/ industry warning signs
7. Cartolina
8. Illustration board



What Do You Already Know?




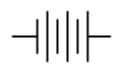
Let us determine how much you already know about analyzing signs, symbols and data. Take this test.

Pretest LO 1

Analyze signs and symbols


- a. **Directions:** Match the electrical symbols in Column A with the corresponding description in column B. Write the letter of your answer in the space provided.

Column A

- _____ 1. 
- _____ 2. 
- _____ 3. 
- _____ 4. 








Column B

- a. Push button
- b. Switch
- c. Wires connected
- d. Incandescent lamp

_____ 5. 

e. Battery

b. Identify the meaning of each sign enumerated below. Write your answer in the space provided.

	<p>_____</p>
	<p>_____</p>
	<p>_____</p>
	<p>_____</p>
	<p>_____</p>
	<p>_____</p>
	<p>_____</p>

Now check your answers using the Answer Key. If you got 90-100% of the items correctly, proceed to the next Learning Outcome. If not, do the next activities to gain knowledge and skills required for mastery.



What Do You Need To Know?

Read the Information Sheet 1.1 very well then find out how much you can remember and how much you learned by doing Self-check 1.1.




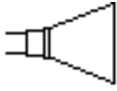
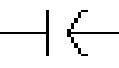
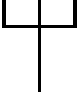

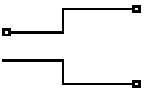


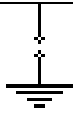
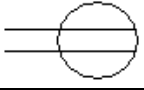





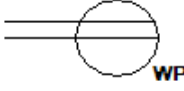
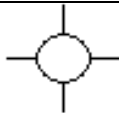

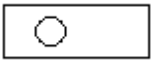
Information Sheet 1.1

COMMON ELECTRICAL SYMBOLS

Electrical Symbols are small drawings or pictograms used to represent various electrical devices in a diagram or plan of an electrical circuit. These symbols are used in sketching schematic diagrams and electrical plans for numerous types of electrical works. Practically any electrical fixture found in a house has a symbol that coincides with a particular fixture in an electrical wiring diagram. These are useful guides for an electrician or electrical contractor, and make the wiring easier to install as well.

The following are common electrical symbols used in sketching wiring plans and diagrams.

Symbol	Description	Symbol	Description
	Conductor/Wire		Ammeter
	Terminal		Voltmeter
	Switch		Galvanometer
	Fuse		Wattmeter
	Connected Wires		Wires Not Connected
	Circuit Breaker		Push Button
	Cell		Bell



	Battery		Buzzer
	Resistor		Speaker
	Capacitor		Antenna
	Diode		Male plug
	Ground		Service Entrance (3 wires)
	Lightning Arrester		Duplex Convenience Outlet
	Kilowatt-Hour Meter		Range Outlet
	Power Panel Board		Special Purpose Outlet
	Lighting Panel Board		Weatherproof Outlet
	Incandescent Lamp		Floor Outlet
	Fluorescent Lamp	S₁	Single Pole Switch

ELECTRICAL SIGNS

Your power tool with its manual may contain "Warning Icons." A warning icon in a picture symbol intended to alert you, and/or to instruct you how to avoid a potentially hazardous condition. Knowing and understanding these symbols will help you operate your tools better and more safely.

Electrical signs and stickers alert students, workers, and visitors to electrical hazards in the area. Alerting workers to high voltage areas, electrical hazards, power lines and other electrical equipment in the area can help prevent fires and injuries. Proper electrical signs can inform workers of the dangers in the area.

	<p>CAUTION indicates some precautionary measures against potential hazardous situations which, if not avoided, may result in minor or moderate injury.</p>
	<p>SAFETY ALERT indicates that a person should observe extra awareness.</p>
	<p>PROHIBITION means that any activity stated by the symbol is not allowed.</p>
	<p>DANGER specifies hazardous situation which, if not avoided, will result in serious injury or even death.</p>
	<p>WARNING specifies a potentially hazardous situation which, if not avoided, could result in serious injury or even death.</p>
	<p>READ AND UNDERSTAND INSTRUCTION MANUAL means that a person should do some reading before doing any activity.</p>
	<p>WEAR EYE PROTECTION indicates that a person should wear safety goggles or any related protection for the eyes.</p>

	<p>ELECTRICAL HAZARD indicates that electrical hazard is present in the area.</p>
	<p>VOLTAGE DANGER indicates high voltage in the area and surrounding equipment.</p>




How Much Have You Learned?


Self-Check 1.1


Analyze electrical symbols and signs.


- A. **Directions:** Match the electrical symbols in **Column A** with their corresponding descriptions in **Column B**. Write the letter of your answer in the space provided.


Column A

_____ 1. 

_____ 2. 

_____ 3. 

_____ 4. 

_____ 5. 

Column B

a. Push button

b. Switch

c. Wires connected

d. Incandescent lamp

e. Battery

B. **Directions:** Fill out the grid with at least five (5) electrical symbols and write their descriptions.

Symbols	Description
1.	
2.	
3.	
4.	
5.	

Refer to the Answer Key. What is your score?



How Do You Apply What You Have Learned?

Show that you learned something by doing this activity.

Activity Sheet 1.1

a. **Directions:** Locate and **box** the different **electrical signs** below.

X	X	X	H	H	H	B	B	O	O	O	O	R
P	R	O	H	I	B	I	T	I	O	N	E	S
X	X	X	N	S	B	X	S	S	S	G	J	S
X	C	R	X	A	B	X	W	W	N	J	J	S
X	A	X	W	F	B	X	L	A	L	J	J	X
W	U	X	S	E	M	X	D	R	R	J	L	X
O	T	X	S	T	M	E	J	N	J	N	L	L
O	I	X	S	Y	G	X	J	I	L	L	L	X
O	O	S	S	A	M	X	J	N	L	L	L	X
O	N	H	T	L	M	X	J	G	L	L	L	X
O	H	L	J	E	M	X	R	R	R	R	R	X
O	O	H	P	R	O	H	I	B	A	R	R	X
V	H	H	J	T	M	X	S	S	S	S	S	S

b. **Directions:** Draw the electrical signs of the following in the space provided:

1. Safety alert	
2. Prohibition	
3. Voltage danger	
4. Warning	
5. Electrical hazard	

LEARNING OUTCOME 2

Interpret technical drawings and plans

PERFORMANCE STANDARDS

- Necessary tools, materials and equipment are identified according to the plan.
- Components, assemblies or object are recognized as per job requirement.
- Dimensions and specification are identified according to job requirements.



Materials/Resources

1. Bulb receptacles – 4 pcs.
2. Toggle switch - 2 pcs.
3. Electrical lay-out
4. Ruler

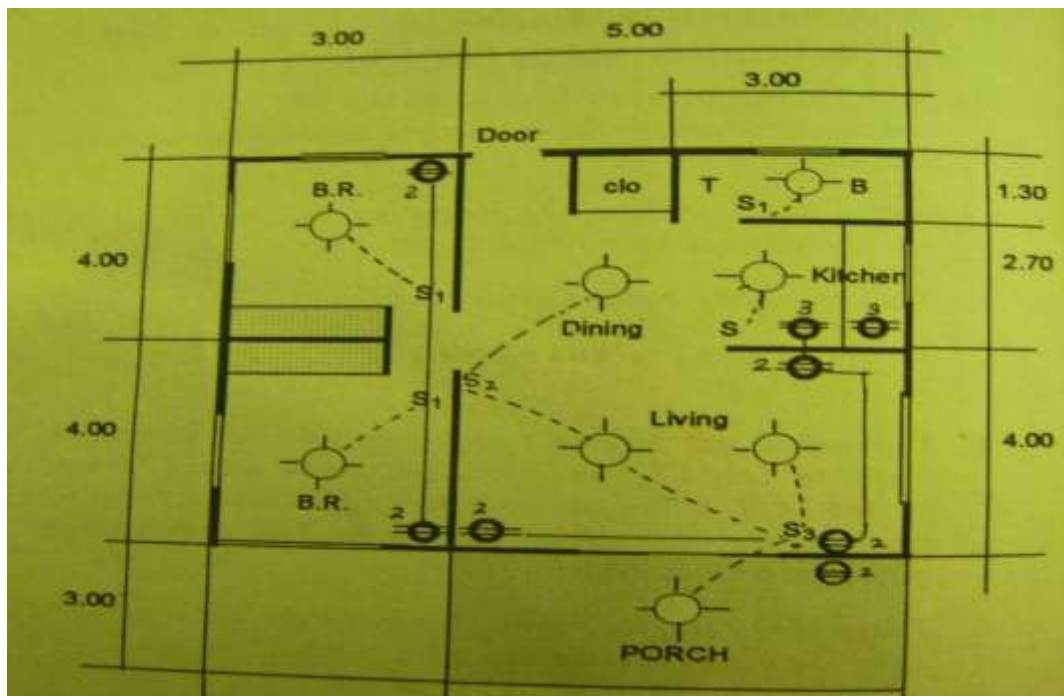


What Do You Already Know?

Let us determine how much you already know about interpreting technical drawings and plans. Take this test.

Pretest LO 2

Directions: Below is a drawing of an electrical plan. Enumerate the number of outlets, bulbs, one-gang switches, two-gang switches, and three-gang switches.



Number of electrical fixtures found in the electrical plan

QUANTITY	ELECTRICAL FIXTURES
	Lamp outlets
	Duplex convenience outlets
	Single gang switches
	Two gang switches
	Three gang switches

Now check your answers using the Answer Key. If you got 90-100% of the items correctly, proceed to the next Learning Outcome. If not, do the next activities to gain knowledge and skills required for mastery.



What Do You Need To Know?

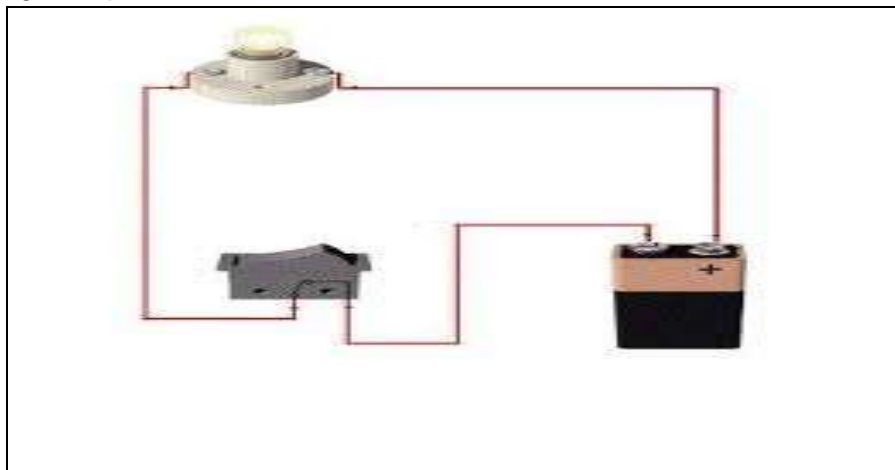
Read the Information Sheet 1.1 very well then find out how much you can remember and how much you learned by doing Self-check 1.1.

Information Sheet 2.1

ELECTRICAL WIRING DIAGRAM

The flow of current in a conductor or wire can be represented in a diagram. There are two types of diagrams: **pictorial diagram** and **schematic diagram**.

- A. **Pictorial diagram** is a sketch of electrical circuit that shows the external appearance of each component. It is much like a photograph of the circuit and uses simple images of parts.



Sample pictorial diagram of one bulb controlled by single pole switch using 9 volt battery source.

- B. **Schematic diagram** is a sketch showing the components of the circuit using standard electrical symbols. It shows the actual number of components and how the wiring is routed but not the actual location.

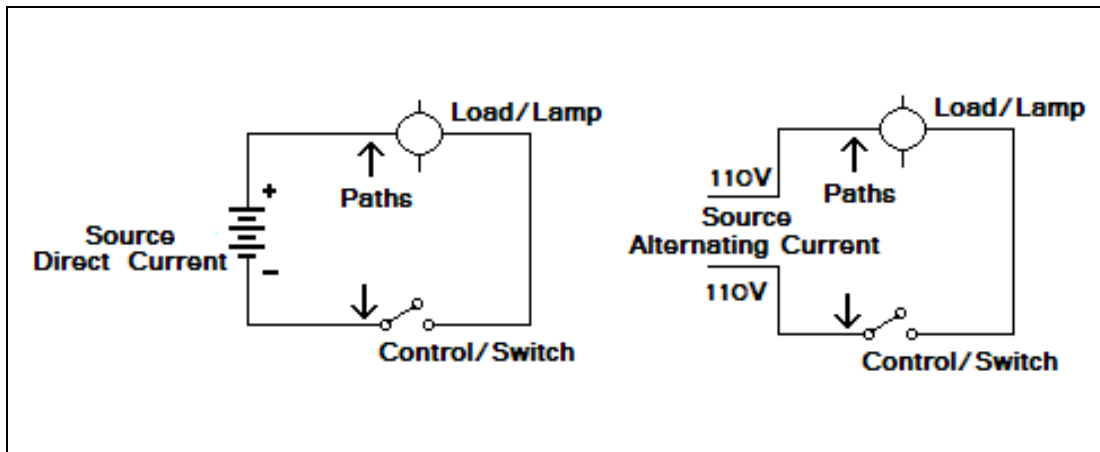


Diagram A

Diagram B

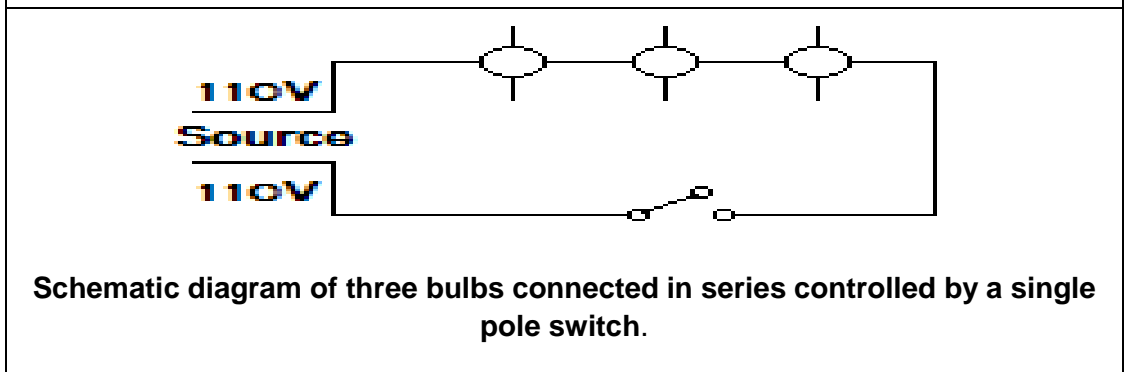
Sample schematic diagrams of one bulb controlled by single pole switch using direct current (Diagram A) and alternating current (Diagram B) source.

C. Types of Circuit

1. **Series Circuit** is a circuit in which lamps are arranged in a chain, so that the current has only one path to take. The current is the same through each load. An example of this is Christmas light/bulbs. It consists of a number of bulbs that are connected side by side to meet the voltage requirement which is 220 volts for alternating current.

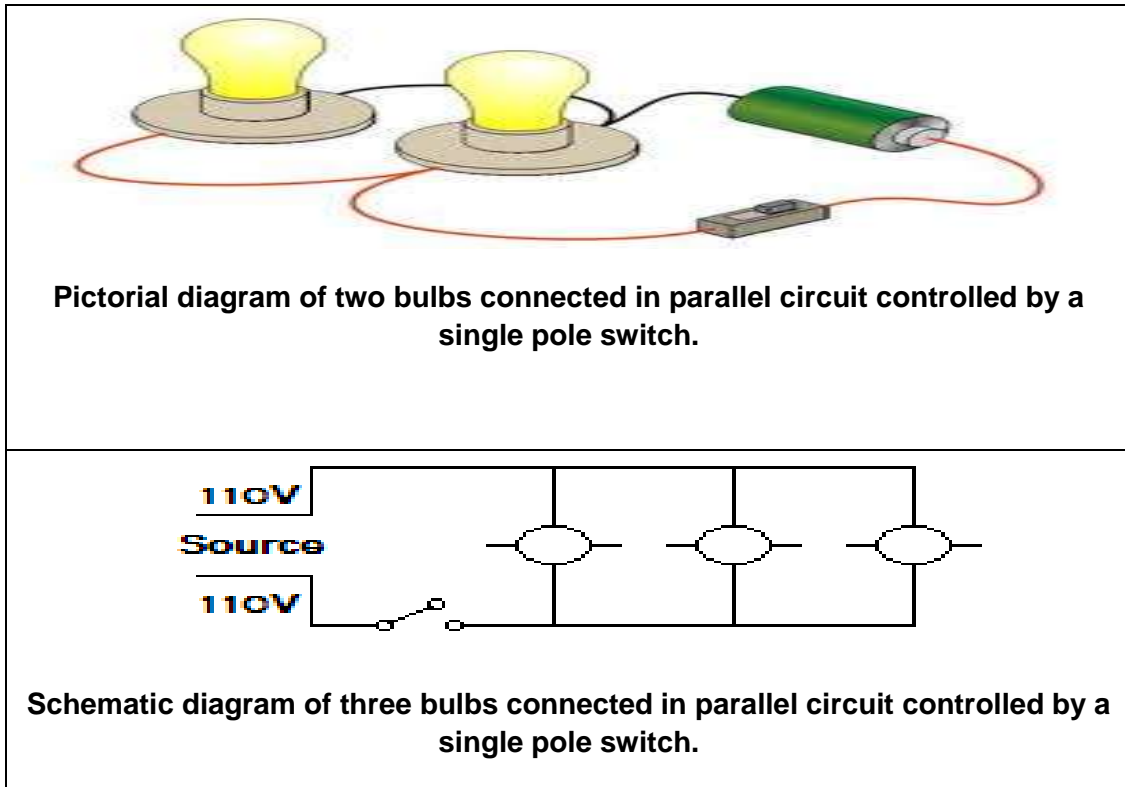


Pictorial diagram of Christmas lights in series circuit



Schematic diagram of three bulbs connected in series controlled by a single pole switch.

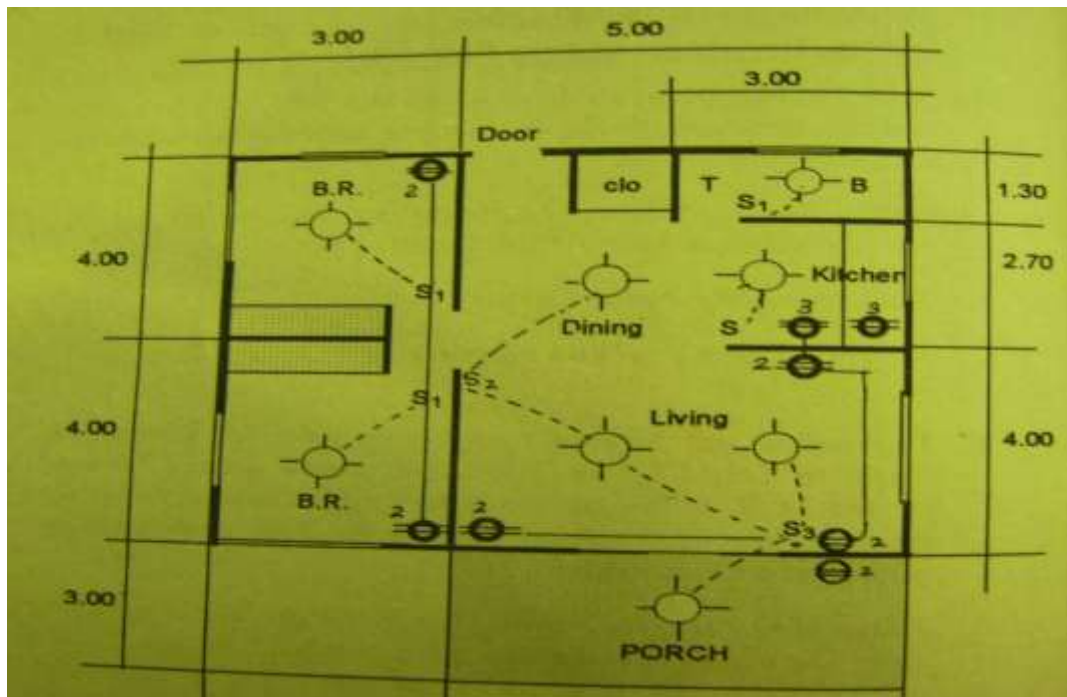
2. **Parallel Circuit** is a circuit in which lamps are connected across the wires. The voltage across each load on a parallel circuit is the same. The advantage of using parallel circuit is that even if one of the lamps fails, the remaining lamps will still function.



ELECTRICAL PLAN

Electrical plan is a graphical presentation of electrical wiring connections to install in a particular house or building. It indicates the position of electrical fixtures such as convenience outlets, switches, lightings, door bells, and others to be installed.

**Sample electrical plan of
single family dwelling**



Number of electrical fixtures found in the electrical plan:

QUANTITY	ELECTRICAL FIXTURES
8 pieces	Lamp outlets
8 pieces	Duplex convenience outlets
4 pieces	Single gang switches
1 piece	Two gang switches
1 piece	Three gang switches



How Much Have You Learned?

Self-Check 2.1

Directions: Draw the schematic diagrams of the following in the space provided:

1. Two bulbs connected in series controlled by a single pole switch using direct current
2. Four bulbs connected in parallel controlled by a single pole switch using alternating current

1.

2.

Refer to the Answer Key. What is your score?

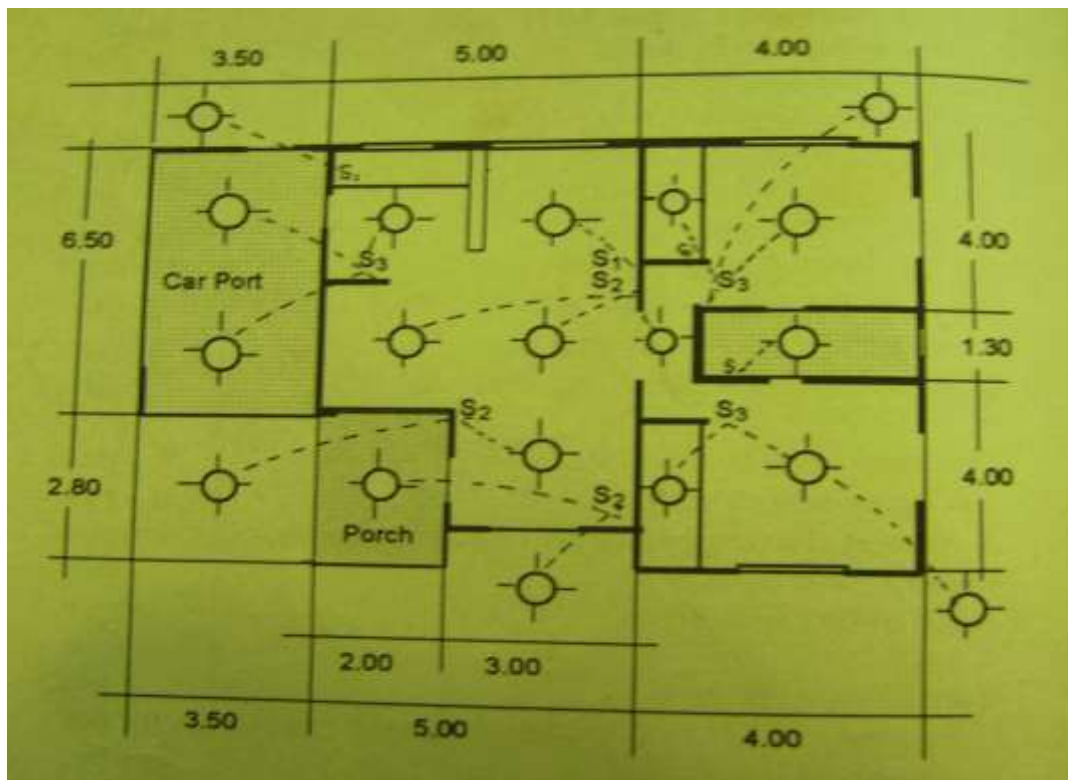


How Do You Apply What You Have Learned?

Show that you learned something by doing this activity.

Activity Sheet 2.1

Directions: Based on the electrical plan below, count the number of electrical fixtures and then write it in table provided after the drawing.



Number of electrical fixtures found in the electrical plan

QUANTITY	ELECTRICAL FIXTURES
	Lamp outlets
	Duplex convenience outlets
	Single gang switches
	Two gang switches
	Three gang switches



Congratulations! You did a great job! Rest and relax a while then move on to the next lesson. Good luck!

REFERENCES

LO1

- Azares, Efren F. and Recana, Cirilo B. 1999, Practical Electricity III; Philippines: Adriana Publishing:.
- Agpaoa, Feleciano. 1991, Interior and Exterior Wiring Troubleshooting; Philippines National Bookstore.

LO 2

- Azares, Efren F. and Recana, Cirilo B. 1999, Practical Electricity III; Philippines: Adriana Publishing:.
- Agpaoa, Feleciano. 1991, Interior and Exterior Wiring Troubleshooting; Philippines National Bookstore.
- Acorda, Aidaida V. and Robles, Rosemarie D. Drafting I & II

LESSON 4

Maintain Tools and Equipment



LEARNING OUTCOMES:

At the end of this lesson, you are expected to do the following:

- LO 1. check condition of tools and equipment;
- LO 2. perform basic preventive maintenance; and
- LO 3. store tools and equipment.



Definition of Terms

5S - Sort, Systematize, Sweep, Sanitize, and Self-Discipline

Functional tools and equipment – tools and equipment that are in good condition and can perform their regular functions

Lubricant - a substance introduced to lessen [friction](#) between moving surfaces; also functions to transport external particles

Lubrication additives- many of the physical properties of various oils and greases

Non-functional tools and equipment – tools and equipment that are not able to perform their regular functions because of impaired and damage parts

Nonpolar solvents - solvents which do not dissolve/are insoluble in water

Pneumatic tool - instrument activated by air pressure

Polar solvents - solvents which dissolve/are soluble in water

Solvent - a component of a solution that dissolves solute and is usually present in large proportions or amounts

Sorting - to sort everything in a work area

LEARNING OUTCOME 1

Check conditions of tools and equipment

PERFORMANCE STANDARDS

- Tools and equipment are identified according to classification/ specification and job requirements.
- Non-functional tools and equipment are segregated and labeled according to classification.
- Safety of tools and equipment are observed in accordance with manufacturer's instructions
- Conditions of PPE are checked in accordance with manufacturer's instructions.



Materials/ Resources

1. Checklist of tools and materials
2. Functional tools in the shop
3. Non-functional tools in the shop

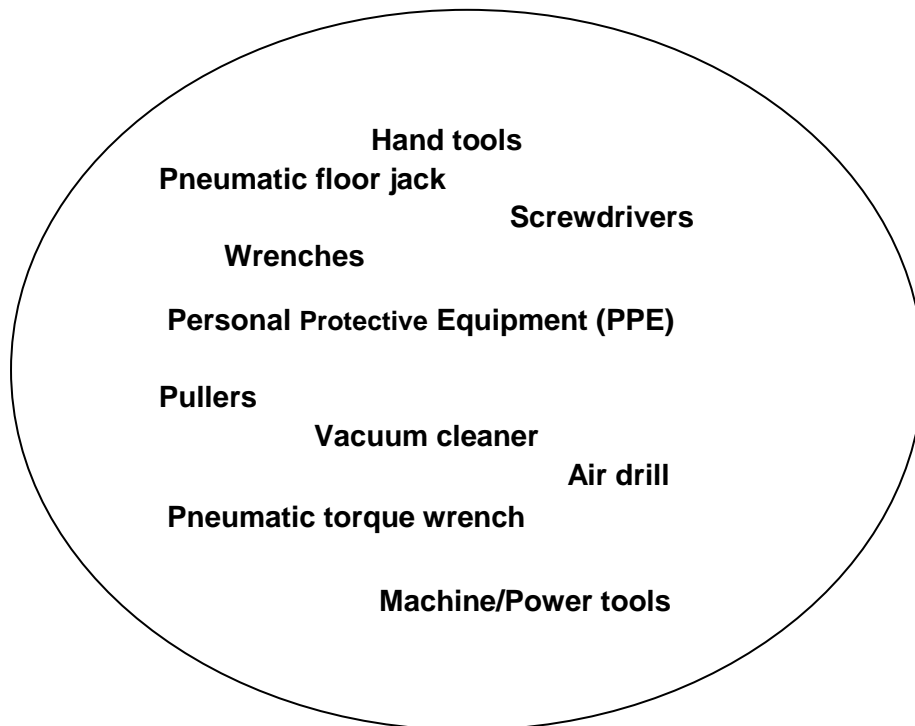


What Do You Already Know?

Let us determine how much you already know about checking conditions of tools and equipment. Take this test.

Pretest LO 1

Directions: Read each statement and identify what is being described. Choose your answer from the circle and write it in the space provided.



- _____ 1. Uses compressed air to flow into the jack cylinder and causes the ram to extend and raise the vehicle
- _____ 2. Tools manipulated by our hands without using electrical energy
- _____ 3. Are used to drive or turn screws. The common type has a single flat blade for driving screws with slotted heads. The other type has a cross slotted head.
- _____ 4. A tool used to turn screws, nuts and bolts with hexagonal or six-sided heads.
- _____ 5. A tool used to remove gears and hubs from shafts, bushings from blind

holes, and cylinders' liners from the engine blocks

- _____ 6. Used for cleaning the floor and car interiors after service.
- _____ 7. This is lighter than a comparable electric drill. Repeatedly stalling or overloading does not damage or overheat the air drill.
- _____ 8. A gadget that protects workers from injury or illness caused by having contact with the dangers/hazards in the workplace, Used by linemen to remove insulation of wire and cables in low and high voltage transmission lines.
- _____ 9. This wrench uses compressed air to quickly and powerfully turn nuts, bolts, and other objects.
- _____ 10. These are tools manipulated by our hands and with the use of electrical energy

Now check your answers using the Answer Key. If you got 90-100% of the items correctly, proceed to the next Learning Outcome. If not, do the next activities to gain knowledge and skills required for mastery.



What Do You Need To Know?

Read the Information Sheet 1.1 very well then find out how much you can remember and how much you learned by doing Self-check 1.1.

Information Sheet 1.1

Classification of Tools and Equipment

A **tool** is a device that can be used to produce an item or accomplish a task, but is not consumed in the process. It can be considered as extension of the human hand, thus increasing speed, power, and accuracy. **Equipment** is any machine powered by electricity.

1. **Hand tools** are tools manipulated by hands without using electrical energy such as puller, hacksaw, pull-push rule, pliers, hammer, and others.
2. **Machine/Power tools** are tools manipulated by our hands and with the use of electrical energy such as electric drill, grinding wheels, vacuum cleaner, and others.

- 3. Pneumatic tools** are tools or instruments activated by air pressure. Pneumatic tools are designed around three basic devices: the *air cylinder*, the *vane motor*, and the *sprayer*.

A. Hand tools

These include screwdrivers, hammers, pliers, wrenches, and pullers.

- 1. Screwdrivers** are used to drive or turn screws. The common type has a single flat blade for driving screws with slotted heads. The other type has the cross slotted head.
- 2. Hammers** are mostly used tools in the shop. They should be gripped at the end of the handle.
- 3. Pliers** are specified types of adjustable wrenches. The two legs move on a pivot so that items of various sizes can be gripped.
- 4. Wrenches** are used to turn screws, nuts, and bolts with hexagonal or six-sided heads. A variety of wrenches are used in the shop.
- 5. Pullers** are used to remove gears and hubs from shafts, bushings from blind holes, and cylinder liners from engine blocks.

B. Machine/Power Tools

- 1. Electric drill** has an electric motor that drives a chuck. The chuck has jaws that can be opened and then closed to grip a drill bit.



- 2. Grinding tool** can be either bench-mounted or installed on a pedestal. They may either have a grinding wheel, view wheel, or two grinding wheels.



3. **Vacuum cleaner** is used for cleaning the floor and car interiors after service.



C. Pneumatic tools

1. **Pneumatic Torque Wrench.** This wrench uses compressed air to quickly and powerfully turn nuts, bolts, and other objects.



2. **Air chisel** uses reciprocating motion to drive a cutting hammering tool. An air hammer drives a chisel to cut off a nut that has frozen to a stud. It can be used with a variety of tools like cutters and punches to do many jobs.



3. **Air drill** is lighter than a comparable electric drill. Repeatedly stalling or overloading does not damage or overheat the air drill.



4. **Air ratchet** uses the sockets and attachments from a standard socket set.



5. **Pneumatic floor jack** uses compressed air to flow into the jack cylinder and causes the ram to extend and raise the vehicle.





How Do You Apply What You Have Learned?

Show that you learned something by doing this activity.

Operation Sheet 1.1

A. Basic Maintenance of Electrical Tools and Equipment

To ensure that your electric tools work when you need them, you must take proper care of them. A good routine of maintenance for your tools is one thing that you can do to make sure that the tool you need is working when you need it.


1. **Keep the tool clean.** To make sure that your electric tools are ready to go when you are, keep them clean and free of dust. Spend some time to clean out the dust every once in a while on your tools while they are inactive in storage.



2. **Check the cords.** Look for tear/cut insulator on the power cords on your electric tools. This will ensure that your electric tool can get the power that it needs to function without an accident.



3. **Use the right tool correctly.** Use tools correctly and for their intended purposes. Follow the safety directions and operating procedures recommended by the manufacturer. When working on a circuit, use approved tools with insulated handles.



- 4. Protect your tools.** Keep tools and cords away from heat, oil, and sharp objects. These hazards can damage insulation. If a tool or cord heats up, stop using it. Report the condition to a supervisor or instructor immediately.



- 5. Use double-insulated tools.** Portable electrical tools are classified by the number of insulation barriers between the electrical conductors in the tool and the worker.



- 6. Store your tools properly.** Keep your electric tools stored in their original cases and containers. This will keep them free of dust and dirt while they are not being used.



Note: Proper care of your electric tools is the key to making sure that they last for many years.

B. Personal Protective Equipment (PPE)

Personal Protective Equipment (PPE) are gadgets used to protect workers from injury or illness caused by having contact with the dangers/hazards in the workplace, whether they are chemical, biological, radiation, physical, electrical, or mechanical.

These are the common Personal Protective Equipment gadgets:



Hard Hats/ Helmets

Gloves



Goggles

Mask

Work boots

Pants

Pictures of electricians working using Personal Protective Equipment



Pictures of Linemen working using Personal Protective Equipment



REMEMBER

1. Personal Protective Equipment should be cared for like the other tools and equipment. Wipe your helmets, gloves, safety shoes before keeping them.
2. These should also be cleaned and stored properly.
3. These should be stored in dry places so that they will not have mold build-up.
4. Over-all suits should be washed regularly so that perspiration and dirt will be washed clean.

C. Classification of Tools

Tools are very useful to us. But tools that are no longer functional may cause harm.

- A. Make an inventory of functional and non-functional tools in your shop.
- B. Classify your tools according to their functions.

➤ Method of identifying non-functional tools and equipment

1. **Visual inspection.** This refers to the visual observation of an expert on the appearance of the tools and equipment.
2. **Functionality.** Vibration or extra noise from the operation means problems with parts and accessories are starting to develop.
3. **Performance.** When there is something wrong with the performance of either hand tools or equipment they need immediate repair or maintenance.
4. **Power supply (for electrically operated only).** Failure to meet the required power supply will result in a malfunction.
5. **Persons involved.** It refers to the technical person who has the knowledge and skills about the technology.

➤ Classifications of tools and equipment according to their uses:

1. Measuring tools
2. Holding tools
3. Cutting tools
4. Driving tools
5. Boring tools
6. Electrical equipment
7. Miscellaneous tools/instrument/equipment

Non-functional tools and equipment are those that are not able to perform their regular function because of impaired and damage parts. Examples of these are the following:



Hammer with a broken handle




Screw driver with a broken handle



**Long Nose
damaged jaw**

Pliers with




A broken/cut foot rule



Electrical equipment with damaged cord

Functional tools and equipment are those that are in good condition and can perform their regular functions. Examples of these are the following:



Standard screwdriver



Philips Screwdriver



Combination pliers



Long Nose Pliers



Wire Stripper



Portable Electric Drill

LEARNING OUTCOME 2

Perform basic preventive maintenance

PERFORMANCE STANDARDS

- Lubricants are identified according to types of equipment.
- Tools and equipment are lubricated according to preventive maintenance schedule or manufacturer's specifications.
- Measuring instruments are checked and calibrated in accordance with manufacturer's instructions.
- Tools are cleaned and lubricated according to standard procedures.
- Defective equipment and tools are inspected and replaced according to manufacturer's specifications.
- Work place is cleaned and kept safe in line with OSHC regulations.



Materials/Resources

1. Lubricating oils
2. Lubricating spray
3. Kerosene
4. Detergent
5. Gasoline
6. Clean rugs
7. Paint brushes



What Do You Already Know?

Let us determine how much you already know about performing basic preventive maintenance. Take this test.

Pretest LO 2

A. Directions: Match the cleaning solvents in **Column A** with their corresponding uses in **Column B**. Write the letter of your answer in the space provided.

Column A	Column B
___ 1. Gasoline	a. It is used to remove dust from the floor and the walls.
___ 2. Kerosene	b. It is used to wash/clean benches, tables, and cabinets.
___ 3. Thinner	c. It is used to remove dust, grease oil, paint, etc.
___ 4. Water	d. It is used to wash greasy tools/ equipment.
___ 5. Detergent Soap and water	e. It is used to remove spilled paint from the floor, walls, and tools.

B. Directions: Choose the letter of the best answer from the choices given and write it on the space provided.

_____ 1. An action to clean your work place thoroughly so that there is no dust on floor, machines and equipment?

- a. sort b. sweep c. sanitize d. self-discipline

_____ 2. A condition of training people to follow cleaning disciplines independently

- a. sort b. sweep c. sanitize d. self-discipline

_____ 3. An action to identify and eliminate all unnecessary items from your work place and dispose of them

- a. sorting b. sweeping c. sanitizing d. self-discipline

_____ 4. An action to arrange or put every necessary item in good order so that they can be easily picked for use.

- a. sweeping b. systematizing c. sanitizing d. sorting

- _____ 5. A condition of maintaining high standards of cleaning and workshop organization at all times.
- a. sweeping b. systematizing c. sanitizing d. sorting

Now check your answers using the Answer Key. If you got 90-100% of the items correctly, proceed to the next Learning Outcome. If not, do the next activities to gain knowledge and skills required for mastery.









What Do You Need To Know?

Read the Information Sheet 2.1 very well then find out how much you can remember and how much you learned by doing Self-check 2.1.

Information Sheet 2.1

A **lubricant** is a substance introduced to lessen [friction](#) between moving surfaces. It may also transport external particles. The property of reducing friction is known as [lubricity](#).

Types and Uses of lubricants	
<p>Anti-Rust Lubricant Spray:</p> <ul style="list-style-type: none"> ○ loosens rusted part ○ cleans and protects ○ drives out moisture ○ stops squeaks ○ frees sticky mechanisms 	
<p>Wire Pulling Lubricant:</p> <ul style="list-style-type: none"> ○ does not damage insulation ○ clings to wire and dries to a slippery film ○ suitable for use with wire or cable covered with rubber (t, thw, thhn, etc) 	
<p>All-Purpose Anti-Rust Lubricant:</p> <ul style="list-style-type: none"> ○ anti-rust ○ lubricating ○ rust removal ○ decontamination ○ conductance 	
<p>Lubricant Oil and Engine Oil:</p> <ul style="list-style-type: none"> ○ lubricates the gear ○ cleans and protect ○ drives out moisture 	

<p>Silicon Lubricant:</p> <ul style="list-style-type: none"> ○ heat stable ○ lubricates ○ protects ○ reduces friction ○ water repellent 	
<div style="display: flex; align-items: center;">  <p>Reminders</p> </div> <p>A good lubricant possesses the following characteristics:</p> <ul style="list-style-type: none"> • High boiling point • Low freezing point • High viscosity index • Thermal stability • Corrosion prevention • High resistance to oxidation 	

Types and Kinds of Cleaning Solvents

Solvent is a component of a solution that dissolves solute and is usually present in large proportions or amounts. It can be classified as **polar** and **nonpolar**. Polar solvents are solvents which dissolve/are soluble in water; while nonpolar solvents are solvents which do not dissolve/are insoluble in water.

Solvents are usually used for cleaning in workshops. They are water, gasoline, kerosene, thinner, and detergent soap.

The table below shows the kinds of cleaning solvents based on their solubility in water.

Cleaning Solvents	Solubility in Water	Polar	Nonpolar
a. water	soluble	x	
b. gasoline	insoluble		x
c. kerosene	insoluble		x
d. thinner	insoluble		x
e. detergent soap	soluble	x	

Uses of Cleaning Solvents

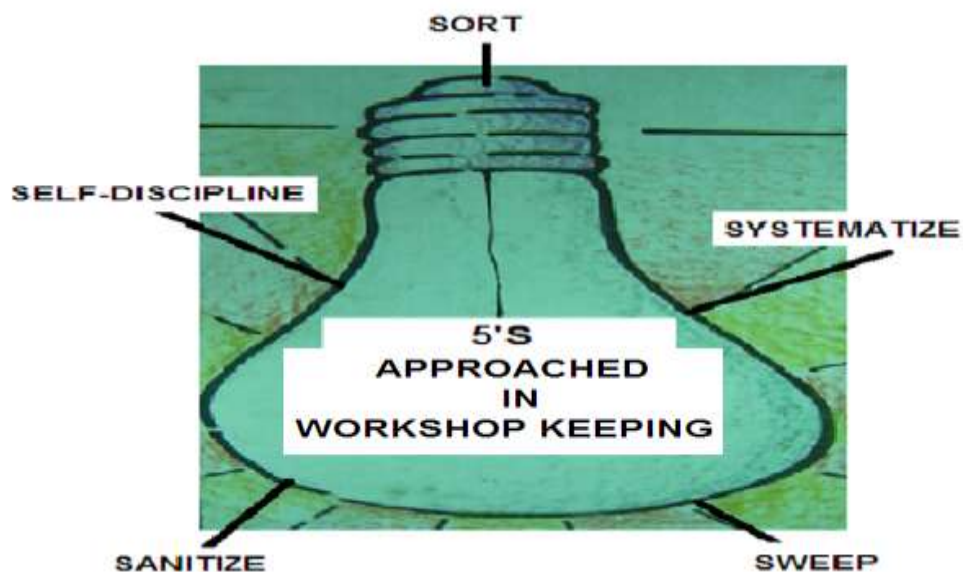
Cleaning Solvents	Uses
Gasoline	Wash greasy tools/ equipment.
Kerosene	Remove dust, grease oil, paint, etc.
Thinner	Remove spilled paint on the floor, walls and tools.
Water	Wash dust in the floor, walls, etc.
Detergent Soap and water	Wash/clean benches, tables, cabinets, etc.

5S Approach in Workshop Keeping

5S is a reference to a list of five Japanese words translated into English. This is an approach of organizing and managing the workplace and work flow with the intent to improve efficiency by eliminating **wastes**, improving **flow** of production, and reducing process delays.

These words are:

Japanese words	English translation
Seiri	Sort
Seiton	Set in order (systematize)
Seiso	Sweep
Seiketsu	Standardize (sanitize)
Shitsuke	Sustain (Self-discipline)



5S APPROACH IN WORKSHOP KEEPING

Sort	Systematize	Sweep	Sanitize	Self-Discipline
Sorting is an action to identify and eliminate all unnecessary items from your work place and dispose of them.	<p>Systematizing is an action to arrange or put every necessary item in good order so that they can be easily picked for use.</p> <ul style="list-style-type: none"> ○ A place for everything ○ Everything is in place 	Sweeping is an action to clean your workplace thoroughly so that there is no dust on the floor, machines, and equipment.	Sanitizing is a condition of maintaining high standards of cleaning and workshop organization at all times.	Self-discipline is a condition of training people to follow cleaning disciplines independently.



How Much Have You Learned?

Self-Check 2.1

A. Directions: Put a (✓) after each word if the solvent is **polar** and (X) if it is **nonpolar**.

1. water ()
2. kerosene ()
3. detergent soap ()
4. gasoline ()
5. thinner ()

B. Directions: Identify the lubricants below by writing their names on the space provided.

1.		_____
2.		_____
3.		_____
4.		_____
5.		_____

Refer to the Answer Key. What is your score?



How Do You Apply What You Have Learned?

Show that you learned something by doing this activity.

Operation Sheet 2.1

Title: **Procedure in Cleaning Tools and Work Area**

Instructions: Bring cleaning solvents, rags and brooms, washing pan, electric fan, and safety apparel. Clean tools and work area.

Procedure:

A. Tools

1. Wear protective clothing and goggles.
2. Gather the tools to be cleaned in the designated area for cleaning.
3. Classify the tools to be cleaned according to how dirty they are.
4. Measure and pour enough amount of cleaning solvent into the washing pan.
5. Submerge the tools in the washing pan.
6. Use paint brush to remove the dirt from the tools.
7. Get the tools from the washing pan and wipe them with rags until dry.
8. Clean and keep all materials used for cleaning.

B. Work Area (Application of 5s)

1. Wear protective clothing and goggles.
2. If there is dirt on the floor such as paint, used oil, grease, rust, etc., remove it first using the appropriate cleaning solvent.
3. Use the broom in cleaning the remaining dirt in the work area and an electric fan to facilitate the drying of the floor.
4. *Assessment:* The teacher will assess the students based on the performance criteria listed below.

PERFORMANCE CRITERIA	PERFORMANCE LEVEL		
	YES	NO	NA
1. Were protective clothing and goggles worn at all times?			
2. Were tools and equipment free of dust, grease, oil, and other substances?			
3. Was the work area dry, free of dust, grease, and other substances?			

4. Were excess cleaning substances cleaned and kept in proper places?			
Overall Performance	<input type="checkbox"/> Satisfactory <input type="checkbox"/> Unsatisfactory		

Student's name: _____

Teacher's comment: _____

LEARNING OUTCOME 3

Store tools and equipment

PERFORMANCE STANDARDS

- Inventory of tools, instruments, and equipment are conducted and recorded as per company practices.
- Tools are inspected and replaced after use.
- Tools and equipment are stored safely in accordance with manufacturer's specifications or company procedures.



Materials

1. Inventory forms
2. Record book/memorandum
3. Receipts
4. Ball pen and
5. Correction fluid



What Do You Already Know?

Let us determine how much you already know about storing tools and equipment. Take this test.

Pretest LO 3

Directions: Write **TRUE** if the statement is correct and **FALSE** if the statement is not correct.

For hand tools

1. Clean dirt and debris from tools after each use.
2. Oil metal and wooden parts to prevent rust.
3. Lightly sand rough wooden handles and apply linseed oil.
4. Repair loose handles.
5. Sharpen blades of cutting tools.

6. Store tools in a clean wet storage area.
7. Protect surfaces of cutting tools in storage.

For equipment

1. Store equipment in a clean wet storage area.
2. Rinse and clean spray equipment after each use.
3. Clean spreaders and check wheel-driven gears.

Now check your answers using the Answer Key. If you got 90-100% of the items correctly, proceed to the next Learning Outcome. If not, do the next activities to gain knowledge and skills required for mastery.



What Do You Need To Know?

Read the Information Sheet 3.1 very well then find out how much you can remember and how much you learned by doing Self-check 3.1.

Information Sheet 3.1

Why Maintain Inventory of Tools and Equipment

A significant point to consider at the start of your career is to acquire good quality tools. They must be made of high-quality steel and manufactured for precision. Special consideration is given to balance so that the tool/equipment will be properly maintained and prevent loses. Since the technician must work with his tools daily, regular inventory of tools/equipment is very significant.

The initial cost of a minimum number of tools is high but there is accompanying warranty which guarantees satisfaction and many years of service. It is better, in the long run, to start with a few carefully selected tools that will take care of your most common needs and then slowly build-up to a complete set. It is sometimes hard to identify and memorize the huge number of tools and equipment in the workshop, thus maintaining the inventory record is of great value.

Maintaining and Storing Tools and Equipment

An important aspect of any business is the maintenance and storage of tools and equipment. The investment in tools and equipment is a significant part of the overhead expenses in any operation. Proper selection and maintenance of equipment are important factors in managing a business. Selecting the proper tool for the job and using the tool properly will increase efficiency and reduce maintenance problems. Purchase tools which are well-made and suited to the intended use. Commercial usage may entail more heavy duty demands on equipment.

Hand tools:

1. Clean dirt and debris from tools after each use.
2. Oil metal parts to prevent rust.
3. Lightly sand rough wooden handles and apply linseed oil.
4. Repair loose handles.
5. Sharpen blades of cutting tools.
6. Store tools in a clean dry storage area.
7. Protect surfaces of cutting tools in storage.

Power tools:

1. Read and follow the maintenance schedule in the owner's manual for each piece of power equipment.
2. Change the oil.
3. Clean the air filter.
4. Lubricate moving parts.
5. Sharpen dull blades or replace worn blades according to the owner's manual.
6. Replace spark plugs.
7. Drain oil and gasoline before long-term storage.
8. Check electric cords and connections on electric-powered tools.
9. Store tools in a clean dry storage area.

Equipment:

1. Store equipment in a clean dry storage area.
2. Rinse and clean spray equipment after each use.
3. Clean spreaders and check wheel-driven gears.

4. Clean carts and wheelbarrows after use.

Sample Proper Arrangement and Storage of Tools and Equipment



You can see in the pictures that all tools and equipment are arranged and stored properly in their own racks. For example, the screw drivers are arranged by type and sizes. Hammers, saws, and c-clamps are in their racks.



How Much Have You Learned?

Self-Check 3.1

Directions: Enumerate the rules for / steps to be followed in proper maintaining and storing of tools and equipment.


HAND TOOLS:

- 1.
- 2.
- 3.
- 4.
- 5.
- 6.
- 7.

EQUIPMENT:

- 1.
- 2.
- 3.
- 4.

Refer to the Answer Key. What is your score?



How Do You Apply What You Have Learned?

Show that you learned something by doing this activity.

Operation Sheet 3.1

INVENTORY OF TOOLS AND EQUIPMENT

Instructions: Given the record book/memorandum, receipts, inventory form, ball pen and correction fluid, conduct inventory of tools and equipment, identify, record and report damaged tools and equipment and give repair recommendations if repairable.

Procedure:

1. Secure inventory forms/memorandum receipt of tools and equipment.
2. Study the parts of the Inventory Form.
3. Check whether the list of tools and equipment in the memorandum receipt tallies with the existing tools and equipment found in the workshop including their specifications and condition.
4. List down any losses and damages you find while conducting the inventory
5. Fill out the remarks column of the inventory forms for any losses/damages.
6. Recommend for replacement of lost tools and equipment and repair of damaged tools and equipment if needed.

SAN FRANCISCO HIGH SCHOOL
Misamis St. Bago Bantay Quezon City

INVENTORY FORM OF TOOLS AND EQUIPMENT

Item No.	Quantity	Unit	Description	Condition	Remarks
1.					
2.					
3.					
4.					
5.					
6.					
7.					
8.					
9.					
10.					
11.					
12.					
13.					
14.					
15.					
16.					
17.					
18.					
19.					
20.					

Prepared by:

Name and Signature

Date: _____

PROCEDURE IN ARRANGING AND STORING TOOLS AND EQUIPMENT

Instructions: In a specific tool cabinet and a tool rack assigned to you, arrange and store tools and equipment accordingly.

Procedure:

1. Classify the tools and equipment according to their types.
2. Arrange the tools by their types in the shelves/racks.
3. Place equipment in designated places or location.

Assessment: The teacher will assess you based on the performance criteria listed below.

PERFORMANCE CRITERIA	PERFORMANCE LEVEL		
	YES	NO	NA
1. Were the tools and equipment ready before performing the task?			
2. Were the tools arranged according to their types?			
3. Were the equipment placed in their proper location and arranged according to their types?			
4. Were the tools/equipment placed in their respective location and accessible for use when needed?			
Overall Performance	<input type="checkbox"/> Satisfactory <input type="checkbox"/> Unsatisfactory		

Student's name: _____

Teacher's comment: _____



Congratulations! You did a great job! Rest and relax a while then move on to the next lesson. Good luck!

REFERENCES

LO1

- Philippine Electrical Code. 2000 Edition.
- Cardenas, Elpidio.1989, Fundamental and Elements of Electricity. Philippines: national Bookstore.
- Philippine Electrical Code. 1992 Edition, Institute of Integrated Electrical Engineers of the Philippines Incorporated.
- Max B. Fajardo Jr. & Leo R. Fajardo. , 2nd Edition.
- Electrical Layout and Estimate.

LO 2

- Philippine Electrical Code. 2000 Edition.
- Cardenas, Elpidio.1989, Fundamental and Elements of Electricity. Philippines: national Bookstore.
- Philippine Electrical Code. 1992 Edition, Institute of Integrated Electrical Engineers of the Philippines Incorporated.
- Max B. Fajardo Jr. & Leo R. Fajardo. , 2nd Edition.
- Electrical Layout and Estimate.

LO 3

- Institute of Integrated Electrical Engineers of the Philippines Incorporated. 1992, Philippine Electrical Code
- Max B. Fajardo Jr. & Leo R. Fajardo. 2nd edition, Electrical Layout and Estimate
- Azares, Efren F. and Recana, Cirilo B. 1999, Practical electricity III; Philippines: Adriana Publishing.
- www.acmehowto.com/howto/maintenance/electrical/
- www.thefabricator.com/safety/safety_article.cfm?id=1095

LESSON 5

Practice Occupational Health and Safety Procedures



LEARNING OUTCOMES:

At the end of this lesson, you are expected to do the following:

- LO 1. identify hazards and risks;
- LO 2. evaluate risks and hazards; and
- LO 3. control hazards and risks.



Definition of Terms

Ampere - unit of measurement for electric current

Circuit - the path of electric current

Conductor - a wire or a cord which provides path for current flow

Connectors and **Adapters** - accessories that are used to connect from boxes to conduits or raceways to the other boxes in the electrical system

Corrugated Plastic Conduit (CPC) - commonly known as flexible non-metallic conduit or the “*moldflex*.”

Hot wire - a wire through which current flows

Insulator - a plastic, rubber, or asbestos material used to cover electric wires

Kilowatt - a unit of power

Metallic Conduits - metal raceways that are classified into four; rigid steel conduit (RSC); intermediate metallic conduit or tubing (IMC or IMT); electrical metallic conduit or tubing (EMC or EMT); and flexible metallic conduit (FMC)

Non-metallic Conduits - plastic conduits or raceways designed to be a channel of wire that are classified as; rigid non-metallic conduit or the PVC, the flexible non-metallic or CPC, and the surface plastic molding

Philippine Electrical Code (PEC) - the governing rules and regulations that ensure safety and fire-free environment

Resistance - the quality of electric current measured in ohms

Threshold Limit Value (TLV) - a level to which it is believed a worker can be exposed day after day for a working lifetime without adverse health effects

Acronyms

OSHA - Occupational Safety and Health Administration

PPE - Personal Protective Equipment

LEARNING OUTCOME 1

Identify hazards and risks

PERFORMANCE STANDARDS

- Workplace hazards and risks are identified and clearly explained.
- Hazards/risks and its corresponding indicators are identified in with the company procedures.
- Contingency measures are recognized and established in accordance with organizational procedures.



Materials/ Resources

Video clips on hazards and risks



What Do You Already Know?

Let us determine how much you already know about identifying hazards and risks. Take this test.

Pretest LO 1

Directions: Match the term in **Column A** with its definition in **Column B**. Write the letter of the answer on the blank.

A

- _____ 1. Adverse health effect
- _____ 2. Hazards
- _____ 3. Chemical hazards
- _____ 4. Risks
- _____ 5. Physical hazards
- _____ 6. Wet floor
- _____ 7. Ergonomic hazards
- _____ 8. Psychological hazards
- _____ 9. Unsafe work practices
- _____ 10. Biological hazards

B

- a. the chance or the probability that a person will be harmed
- b. caused by organisms such as viruses, bacteria, fungi, and parasites
- c. a source of potential damage, harm, or adverse health effects
- d. safety hazard
- e. vapor or gaseous substance
- f. slips or falls
- g. hot or cold condition
- h. decrease in life span
- i. those that are basically causing stress
- j. awkward posture arising from improper work methods

Now check your answers using the Answer Key. If you got 90-100% of the items correctly, proceed to the next Learning Outcome. If not, do the next activities to gain knowledge and skills required for mastery.



What Do You Need To Know?

Read the Information Sheet 1.1 very well then find out how much you can remember and how much you learned by doing Self-check 1.1.

Information Sheet 1.1

HAZARDS AND RISKS

What is the difference between a hazard and a risk?

A **hazard** is something that can cause harm, e.g., electricity, chemicals, working on a ladder, noise, a keyboard, a bully at work, or stress.

Risk is the chance or probability that a person will be harmed or experience an adverse health effect once to a hazard. It may also apply to situations with property or equipment loss.

A risk is the chance, high or low, that any hazard will actually cause somebody harm.



For example, working alone away from your office can be a hazard. The risk of personal danger may be high. Electrical repair is a hazard. If someone accidentally turned on the power, the worker's life will be in a 'high-risk' category.

Five Basic Workplace Hazards

There are five major types of hazards which can put both your health and your safety at risk.

1. Chemical hazards
2. Physical hazards
3. Biological hazards
4. Ergonomic hazards or job-related hazards
5. Psychological hazards or stress

CHEMICAL HAZARDS



If you are working with cleaning products, bleaches, paints, and other chemical agents, you need to understand what a chemical hazard is as well as how to protect yourself.

Chemical hazards include:

- liquids such as cleansers, acids, and paints
- vapours and fumes such as welding fumes
- gases such as carbon monoxide
- products that can catch fire or explode



PHYSICAL HAZARDS

Physical hazards include:

- Machinery
- Electrical power
- Noise
- Power and hand tools
- Working and walking surfaces
- Trip and fall hazards
- Ladders and scaffolds
- Heat and cold
- Ventilation



BIOLOGICAL HAZARDS

Be careful around ticks, mouse droppings, bird poop, and wild animals. You might get sick from working around certain animals, including people. Biological hazards include bacteria, viruses, insects, plants, birds, animals, and humans. The risks run from skin irritation and allergies to infections.

Dangers can come from:

- unclean restrooms
- mold and fungus
- bacteria
- insect stings
- animal bites
- poorly stored medical waste



ERGONOMIC HAZARDS

If your work area is poorly designed, you can develop long-term health problems. These problems can arise from simple things, like working for long periods in an awkward position or having to make the same motions over and over again.

Problems can come from:

- poor lighting
- chairs
- lifting
- repeated movements
- computer screens



PSYCHOLOGICAL HAZARDS

These hazards cause stress to a worker. This kind of hazard troubles an individual very much to an extent that his general well-being is affected.

Stress can lead to long-term health problems. Headaches, anxiety, and impatience are early signs of stress.

Causes of stress in the workplace include:

- heavy workloads
- lack of control over the pace of work
- shift work
- noise
- working by yourself
- fear of job loss
- conflict with the employer



Examples of Hazards

Workplace Hazard	Example of Hazard	Example of Harm Caused
thing	knife	cut
substance	benzene	leukemia
material	asbestos	mesothelioma
source of energy	electricity	shock, electrocution
condition	wet floor	slips, falls
process	welding	metal fume fever
practice	hard rock mining	silicosis

THRESHOLD LIMIT VALUE

One of the most critical hazards that one may encounter are chemical hazards. Chemicals may produce reactions that may endanger one's health and life. This is the reason why the American Conference of Governmental Hygienists (ACGIH) established a threshold limit value (TLV).

TLV is the term used by the ACGIH to express the airborne concentration of a material to which nearly all persons can be exposed day after day, without adverse health effects.



How Much Have You Learned?

Self-Check 1.1

Below is a list of common workplace hazards. Write three examples of each type of hazard on the blanks provided.

1. Chemical hazard

2. Physical hazard

3. Biological hazard

4. Ergonomic hazard or Job related

5. Psychological hazards

Refer to the Answer Key. What is your score?



How Do You Apply What You Have Learned?

Show that you learned something by doing this activity.

Job Sheet 1.1

RESEARCH WORK

- a. Research on the internet about different hazards and risks.
- b. Be able to identify these different hazards.
- c. Make a write-up on your research on workplace hazards and risks.

LEARNING OUTCOME 2

Evaluate hazards and risks

PERFORMANCE STANDARDS

- Terms of maximum tolerable limits are identified based on threshold limit values (TLV).
- Effects of hazards are determined.
- Occupational Health and Safety (OHS) issues and concerns are identified in accordance with workplace requirements and relevant workplace OHS legislation.



Materials/ Resources

1. Threshold limit value (TLV) table
2. Video clips about hazards and risks



What Do You Already Know?

Let us determine how much you already know about evaluating hazards and risks. Take this test.

Pretest LO 2

Directions: Select the letter of the term being described.

_____ 1. The cross disciplinary area concerned with the **safety**, **health**, and **welfare** of people engaged in **work or employment**.

- a.) Waste management b) PEC c) ACGIH d) OHS

_____ 2. The **collection**, **transport**, **processing** or disposal, managing and monitoring of **waste** materials.

- a) Waste management b) PEC c) ACGIH d) OHS

_____3. TLV means

- a) Threshold limited value b) Threshold live value c) Threshold limit value

_____4. TWA means

- a) Time-wasted Average b) Time-weighted average c) Total-weighted average

_____5. TLV-C means

- a) Threshold limit value-ceiling b) Threshold limited value-ceiling c) Threshold live value-ceiling

_____6. One type of hazard that needs careful evaluation before extinguishing

- a) Chemical b) Water c) Fire

_____7. It is a fifteen minutes exposure to risk.

- a) TLV-STEL b) TLV-C c) TLV-TWA

_____8. The type of hazard presented by chemicals with lower flash points.

- a) Personal hazard b) flammability hazard c) explosion hazard

_____9. A process where a person identifies, evaluates, and determines the solution to the risks.

- a) Chemical assessment b) Risk assessment c) Physical assessment

_____10.) Any alteration of the physical, chemical and biological properties of the atmospheric air, or any discharge thereto of any liquid, gaseous or solid substances that will or is likely to create or to render the air resources of the country harmful, detrimental, or injurious to public health, safety or welfare or which will adversely affect their utilization for domestic, commercial, industrial, agricultural, recreational, or other legitimate purposes.

- a) Pollution b) atmospheric pollution c) air pollution

Now check your answers using the Answer Key. If you got 90-100% of the items correctly, proceed to the next Learning Outcome. If not, do the next activities to gain knowledge and skills required for mastery.



What Do You Need To Know?

Read the Information Sheet 2.1 very well then find out how much you can remember and how much you learned by doing Self-check 2.1.

Information Sheet 2.1

What is risk assessment?

Occupational Health and Safety (OHS) is a **cross-disciplinary** area concerned with protecting the **safety**, **health**, and **welfare** of people engaged in **work or employment**.

The goal of all occupational safety and health programs is to foster a safe work environment. As a secondary effect, it may also protect co-workers, family members, employers, customers, suppliers, nearby communities, and other members of the public who are impacted by the workplace environment. It may involve interactions among many subject areas, including **occupational medicine**, **occupational (or industrial) hygiene**, **public health**, **safety engineering / industrial engineering**, **chemistry**, **health**, and **physics**.

Risks include acute and chronic health effects, for example, irritation or cancer, and physical effects such as fires or explosions. The hazards are physical and health hazards.

II. Risk assessment

A. Risk assessment is the process where you:

1. identify hazards
2. analyze or evaluate the risk associated with that hazard
3. determine appropriate ways to eliminate or control the hazard

B. Factors that influence the degree of risk include:

- how much a person is exposed to a hazardous thing or condition
- how the person is exposed (e.g., breathing in a vapor, skin contact), and how severe are the effects under the conditions of exposure

ACGIH has established TLVs for approximately 850 chemicals.

TLVs may appear as:

TLV-TWA or time-weighted average, which is an average eight-hour exposure limit;

TLV-STEL or short-term exposure limit, which is a fifteen-minute exposure limit, or

TLV-C or ceiling, which is a limit which should never be exceeded without protection.

II. Fire and Explosion Hazard Assessment

Fire is a hazard that needs careful evaluation before extinguishing it. Not all fires can be extinguished by water. That is why it is necessary that we identify the cause of fire before dealing with it.

1. Flash Point and Method Used: Lowest temperature at which a liquid will give off enough flammable vapors to ignite. Since flash points vary according to how they are obtained, the method used must be listed. Chemicals with lower flash points present a greater flammability hazard.

2. Flammable Limits: Range of concentrations over which a flammable vapor mixed with air will flash or explode if an ignition source is present. Range extends between lower explosive limit (LEL) and upper explosive limit (UEL) and is expressed in percentage of volume of vapor or gas in air (0 – 100%).

Chemicals with a broad flammable range (i.e., range between the LEL and the UEL) and/or a flammable range in the lower percentages present a greater flammability hazard.

3. Extinguishing Media: Fire-fighting material for use on substance that is burning. Fire-fighting material should be indicated by its generic name (e.g. water, foam, dry chemical, etc.).

III. Waste management is the [collection](#), [transport](#), [processing](#) or disposal, managing, and monitoring of [waste](#) materials. The term usually relates to materials produced by human activity, and the process is generally undertaken to reduce their effect on [health](#), the [environment](#), or [aesthetics](#).

Waste management is a distinct practice from [resource recovery](#) which focuses on delaying the rate of consumption of [natural resources](#). The management of waste treats all materials as a single class, whether [solid](#), [liquid](#), [gaseous](#), or [radioactive](#) substances, and tried to reduce the harmful environmental impacts of each through different methods.

Waste management practices differ for [developed](#) and [developing nations](#), for [urban](#) and [rural areas](#), and for [residential](#) and [industrial](#) producers. Management for non-[hazardous waste](#) residential and institutional waste in metropolitan areas is usually the responsibility of [local government](#) authorities, while management for non-hazardous commercial and industrial waste is usually the responsibility of the generator.

PHILIPPINE CLEAN AIR ACT OF 1999

(Refer to **Appendix 1** for elaboration)

The Philippine Clean Air Act of 1999 under its “*Declaration of Principles*” stated that the State shall protect and advance the right of the people to a balanced and healthful ecology in accord with the rhythm and harmony of nature.

Declaration of Policies. The State shall pursue a policy of balancing development and environmental protection. To achieve this end, the framework for sustainable development shall be pursued.

Recognition of Rights. Pursuant to the above-declared principles, the following rights of citizens are hereby sought to be recognized and the State shall seek to guarantee their enjoyment.

Definitions.- As used in this Act:

- a) “*Air pollutant*” means any matter found in the atmosphere other than oxygen, nitrogen, water vapor, carbon dioxide, and the inert gases in their natural or normal concentrations, that is detrimental to health or the environment, which includes, but not limited to smoke, dust, soot, cinders, fly ash, solid particles of any kind, gases, fumes, chemical mists, steam and radioactive substances;
- b) “*Air pollution*” means any alteration of the physical, chemical and biological properties of the atmospheric air, or any discharge thereto of any liquid, gaseous or solid substances that will or is likely to create or to render the air resources of the country harmful, detrimental, or injurious to public health, safety or welfare or which will adversely affect their utilization for domestic, commercial, industrial, agricultural, recreational, or other legitimate purposes;
- c) “*Ambient air quality guideline values*” means the concentration of air over specified periods classified as short-term and long-term which are intended to serve as goals or objectives for the protection of health and/or public welfare. These values shall be used for air quality management purposes such as determining time trends, evaluating stages of deterioration or enhancement of the air quality, and in general, used as basis for taking positive action in preventing, controlling, or abating air pollution;
- d) “*Ambient air quality*” means the general amount of pollution present in a broad area; and refers to the atmosphere’s average purity as

distinguished from discharge measurements taken at the source of pollution;

e) *“Certificate of Conformity”* means a certificate issued by the Department of Environment and Natural Resources to a vehicle manufacturer / assembler or importer certifying that a particular new vehicle or vehicle type meets the requirements provided under this Act and its rules and regulations;

f) *“Department”* means the Department of Environment and Natural Resources;

g) *“Eco-profile”* means the geographic-based instrument for planners and decision makers which present an evaluation of the environment quality and carrying capacity of an area. It is the result of the integration of primary data and information on natural resources and antropogenic activities on the land which were evaluated by various environmental risk assessment and forecasting methodologies that enable the Department to anticipate the type of development control necessary in the planning area.

h) *“Emission”* means any air contaminant, pollutant, gas stream or unwanted sound from a known source which is passed into the atmosphere;

i) *“Greenhouse gases”* means those gases that can potentially or can reasonably be expected to induce global warming, which include carbon dioxide, oxides of nitrogen, chloroflourocarbons, and the like;

j) *“Hazardous substances”* means those substances which present either: (1) short-term acute hazards such as acute toxicity by ingestion, inhalation, or skin absorption, corrosivity or other skin or eye contact hazard or the risk of fire explosion; or (2) long-term toxicity upon repeated exposure, carcinogecity (which in some cases result in acute exposure but with a long latent period), resistance to detoxification process such as biodegradation, the potential to pollute underground or surface waters;

k) *“Infectious waste”* means that portion of medical waste that could transmit an infectious disease;

l) *“Medical waste”* means the materials generated as a result of patient diagnosis, treatment, or immunization of human beings or animals;

m) *“Mobile source”* means any vehicle propelled by or through combustion of carbon-based or other fuel, constructed and operated

principally for the conveyance of persons or the transportation of property goods;

n) "*Motor vehicle*" means any vehicle propelled by a gasoline or diesel engine or by any means other than human or animal power, constructed and operated principally for the conveyance of persons or the transportation of property or goods in a public highway or street open to public use;

o) "*Municipal waste*" means the waste materials generated from communities within a specific locality;

p) "*New vehicle*" means a vehicle constructed entirely from new parts that has never been sold or registered with the DOTC or with the appropriate agency or authority, and operated on the highways of the Philippines, any foreign state or country;

q) "*Octane Rating or the Anti-Knock Index(AKI)*" means the rating of the anti-knock characteristics of a grade or type of automotive gasoline as determined by dividing by two (2) the sum of the Research Octane Number (RON), plus the Motor Octane Number (MON); the octane requirement, with respect to automotive gasoline for use in a motor vehicle or a class thereof, whether imported, manufactured, or assembled by a manufacturer, shall refer to the minimum octane rating of such automotive gasoline which such manufacturer recommends for the efficient operation of such motor vehicle, or a substantial portion of such class, without knocking;

r) "*Ozone Depleting Substances (ODS)*" means those substances that significantly deplete or otherwise modify the ozone layer in a manner that is likely to result in adverse effects of human health and the environment such as, but not limited to, chloroflourocarbons, halons and the like;

s) "*Persistent Organic Pollutants (POPs)*" means the organic compounds that persist in the environment, bioaccumulate through the food web, and pose a risk of causing adverse effects to human health and the environment. These compounds resist photolytic, chemical and biological degradation, which shall include but not be limited to dioxin, furan, Polychlorinated Biphenyls (PCBs), organochlorine pesticides, such as aldrin, dieldrin, DDT, hexachlorobenzene, lindane, toxaphere and chlordane;

t) "*Poisonous and toxic fumes*" means any emissions and fumes which are beyond internationally - accepted standards, including but not limited to the World Health Organization (WHO) guideline values;

u) "*Pollution control device*" means any device or apparatus used to prevent, control or abate the pollution of air caused by emissions from identified

pollution sources at levels within the air pollution control standards established by the Department;

v) "*Pollution control technology*" means the pollution control devices, production process, fuel combustion processes or other means that effectively prevent or reduce emissions or effluent;

w) "*Standard of performance*" means a standard for emissions of air pollutant which reflects the degree of emission limitation achievable through the application of the best system of emission reduction, taking into account the cost of achieving such reduction and any non-air quality health and environmental impact and energy requirement which the Department determines, and adequately demonstrates; and

x) "*Stationary source*" means any building or immobile structure, facility or installation which emits or may emit any air pollutant.



How Much Have You Learned?

Self-Check 2.1

DIRECTIONS: Multiple choice. Write the letter of the correct answer and write it in the space provided.

_____ 1. What kind of hazard do chemicals with lower flash points present?

- a) Personal hazard b) flammability hazard c) explosion hazard d) skin hazard

_____ 2. Process where a person identify, evaluate and determine the solution to the risks.

- a) Chemical assessment b) Risk assessment c) Physical assessment d) NC assessment

_____ 3. Any alteration of the physical, chemical and biological properties of the atmospheric air, or any discharge thereto of any liquid, gaseous or solid substances that will or is likely to create or to render the air resources of the country harmful, detrimental, or injurious to public health, safety or welfare or which will adversely affect their utilization for domestic, commercial, industrial, agricultural, recreational, or other legitimate purposes.

- a) Pollution b) atmospheric pollution c) air pollution

_____ 4. The cross disciplinary area concerned with the the [safety](#), [health](#) and [welfare](#) of people engaged in [work or employment](#).

- a.) Waste management b) PEC c) ACGIH d) OHS

_____ 5. the [collection](#), [transport](#), [processing](#) or disposal, managing and monitoring of [waste](#) materials.

- a) Waste management b) PEC c) ACGIH d) OHS

Refer to the Answer Key. What is your score?



How Do You Apply What You Have Learned?

Show that you learned something by doing this activity.

Activity Sheet 2.1

A. Do this activity at home or during your free time:

1. Download and watch a video presentation on different hazards and risks.
2. Make a short write-up on the video presentation you have watched.

B. Answer the following questions:

1. What type of hazard was viewed in the video?
2. What risks were involved?
3. If you are going to evaluate the hazard and risk you had viewed, what possible recommendations will you give? Why?

LEARNING OUTCOME 3

Controlling hazards and risks

PERFORMANCE STANDARDS

- Occupational Health and Safety (OHS) procedures for controlling hazards and risks are strictly followed.
- Procedures in dealing with workplace accidents, fire, and emergencies are followed in accordance with the organization's OHS policies.
- Personal Protective Equipment (PPE) is correctly used in accordance with organization's OHS procedures and practices.
- Procedures in providing appropriate assistance in the event of workplace emergencies are identified in line with the established organizational protocol.



Materials

1. Personal protective equipment:

- Safety goggles
- Safety shoes
- Safety helmet
- Safety gloves
- Safety shoes
- Safety belt

2. First aid kit



What Do You Already Know?

Let us determine how much you already know controlling hazards and risks.
Take this test.

Pretest LO 3

A. DIRECTIONS: Select the correct answer from the box that corresponds to the statement in each number. Write the correct answer in the space provided.

IDENTIFY THE HAZARD	ASSESS THE RISK
ENGINEERING CONTROL	PERSONAL PROTECTIVE EQUIPMENT
	ADMINISTRATIVE CONTROL
	ELIMINATE HAZARDS

_____ 1. Includes ear and eye protection, respirators, and protective clothing.

_____ 2. Changing a piece of machinery (for example, using proper machine guards) or a work process to reduce exposure to a hazard

_____ 3. Working a limited number of hours in a hazardous area

_____ 4. The process where you identify hazards, analyze, or evaluate the risk associated with that hazard, and determine appropriate ways to eliminate or control the hazard

_____ 5. Identify the source of the problem

B. DIRECTIONS: In the statements below write **True** if the statement is correct and **False** if the statement is incorrect.

1. General cleanliness in the workplace is an important method of controlling hazards.
2. Good housekeeping reduces the risk of fire and is cost-effective.
3. Safety signs are a method of hazard control.
4. Hygiene (cleanliness) is not as important as a method of controlling hazards.
5. Before you leave work, wash/shower and change your clothes when necessary to prevent bringing workplace contaminants home to your family.

Now check your answers using the Answer Key. If you got 90-100% of the items correctly, proceed to the next Learning Outcome. If not, do the next activities to gain knowledge and skills required for mastery.



What Do You Need To Know?

Read the Information Sheet 3.1 very well then find out how much you can remember and how much you learned by doing Self-check 3.1.

Information Sheet 3.1

HAZARD CONTROL

All workplace hazards (chemical, physical, etc.) can be controlled by a variety of methods. The goal of controlling hazards is to **prevent workers from being exposed to occupational hazards**. Some methods of hazard control are more efficient than others, but a combination of methods usually provides a safer workplace than relying on only one method. Some methods of control are cheaper than others but may not provide the most effective way to reduce exposures.

To control **hazards** in your workplace you need to **identify** and **understand** those hazards. Your first priority should always be to eliminate the hazards. If the hazards can't be eliminated, try finding safer ways to carry out those tasks by substituting less harmful substances or changing the work environment through engineering controls. Also consider changing how work activities are organized and performed. For example, reduce the time workers are exposed to a hazard by rotating them to another task.

A. Controlling workplace hazards

Once a hazard has been identified and the risk assessed, control measures should be put into place. A simple list of control measures can be utilized - the hierarchy of control.



1. Identify the Hazard

Identify the source of the problem



2. Assess the Risk

Risk assessment is the process where you:

- identify hazards
- analyze or evaluate the risk associated with that hazard

- determine appropriate ways to eliminate or control the hazard



3. Eliminate the Hazard or Risk

Elimination of a specific hazard or hazardous work process, or preventing it from entering the workplace is the most effective method of control. Eliminating a hazard means removing it completely.



4. Engineering Control may mean changing a piece of machinery (for example, using proper machine guards) or a work process to reduce exposure to a hazard.



5. Administrative Controls


Working a limited number of hours in a hazardous area is an example of an administrative control. One example is job rotation.

6. Substitution is one measure of replacing one hazardous agent or work process with a less dangerous one. It is important to consider worker health and safety when work processes are still in the planning stages.



Provide Personal Protective Equipment

Personal Protective Equipment (PPE) includes ear and eye protection, respirators, and protective clothing.



Remember: *it is always better to control the hazard as close to the source as possible. Using personal protection is the least acceptable and least effective of all control measures.*



How Much Have You Learned?

Self-Check 3.1

DIRECTIONS: Select the correct answer from the box that corresponds to the statement in each number. Write the correct answer in the space provided.

IDENTIFY THE HAZARD	ASSESS THE RISK
PERSONAL PROTECTIVE EQUIPMENT	
ENGINEERING CONTROL	
ADMINISTRATIVE CONTROL	
ELIMINATE HAZARDS	

_____ 1. It includes ear and eye protection, respirators, and protective clothing.

_____ 2. It may mean changing a piece of machinery (for example, using proper machine guards) or a work process to reduce exposure to a hazard.

_____ 3. Working a limited number of hours in a hazardous area

_____ 4. The process where you identify hazards, analyze or evaluate the risk associated with that hazard, and determine appropriate ways to eliminate or control the hazard.

_____ 5. Identify the source of the problem.

Refer to the Answer Key. What is your score?



What Do You Need To Know?

Read the Information Sheet 1.1 very well then find out how much you can remember and how much you learned by doing Self-check 1.1.

Information Sheet 3.2

YOUR HEALTH AND SAFETY AT WORK

Personal hygiene

Finally, personal hygiene (cleanliness) is also very important as a method of controlling hazards. Your employer should provide facilities so you can wash and/or take a shower every day at the end of your shift, no matter what your job is. Wash your skin and hair with a mild soap, rinse and dry your skin completely to protect it. Washing hands regularly, and

eating and smoking away from your work area help to prevent ingesting contaminants.

Do not take workplace hazards home with you!




Lack of personal cleanliness can affect your family's health.

Your family can be exposed to hazards you work with if you bring chemicals and

other workplace contaminants home with you on your clothes, hair or skin. Before you leave work, wash/shower and change your clothes when necessary to prevent bringing workplace contaminants home.

Leave your dirty clothes at work or, if you must wash them at home, wash them separately — not with the family wash.



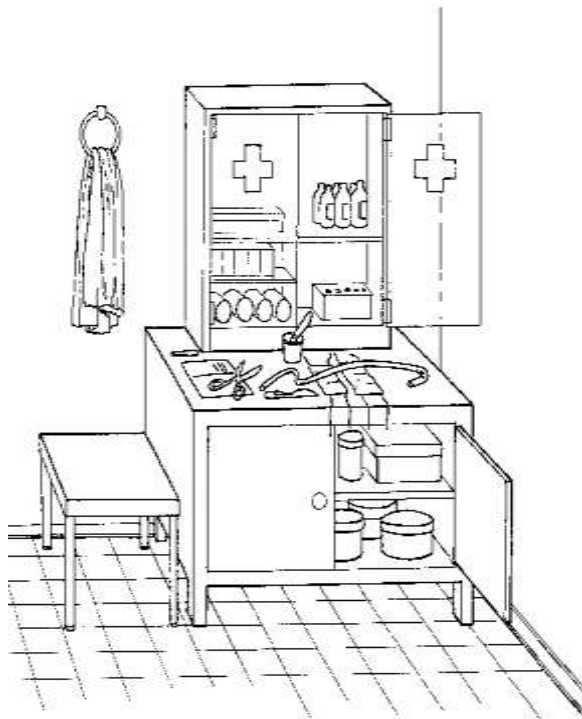
It may seem that the amount of contaminant you can bring home on your clothes or skin is very small and cannot hurt your family. In reality a small exposure every day for months can add up to a big exposure. A classic example of this “spreading the hazard” involves asbestos, where wives of asbestos workers have developed asbestosis from exposure to the asbestos on their husbands' work clothes. Similarly, children have developed lead poisoning from exposure to lead which comes home on their parents' work clothes.

If you wear protective clothing at work, such as aprons, laboratory coats, overalls, etc., these should be cleaned regularly and you should inspect them for holes or areas that are worn out. Workers who launder these clothes should be trained in the types of hazards they may work with and how they can be controlled. Inspect your underclothes at home for any signs of contamination with oils, solvents, etc. If you find any signs, then it means your protective clothing at work is not effective.

Every workplace should have some kind of first aid facility

Every workplace should have at least minimal first aid facilities as well as adequate personnel trained to provide first aid. First aid facilities and trained personnel are important components of a healthy and safe workplace.

A basic first aid facility



1. General cleanliness in the workplace is an important method of controlling hazards.
2. Good housekeeping reduces the risk of fire and is cost-effective.
3. Good housekeeping measures should be planned when work processes are in the design stage.
4. Safety signs are **not** a method of hazard control.
5. Personal cleanliness is an important method of controlling hazards.
6. Your employer should provide facilities so you can wash and/or take a shower every day.
7. Before you leave work, wash/shower and change your clothes when necessary to prevent bringing workplace contaminants home to your family.
8. Leave your dirty clothes at work. If you must wash them at home, wash them separately — never wash your work clothes with your family's wash.
9. Your protective clothing should be cleaned regularly. Inspect your protective clothing for holes and worn areas that could leave you open to exposures.
10. Inspect your undergarments for signs of contamination.
11. Your workplace should have at least minimal first aid facilities.

EMERGENCY PREPAREDNESS

Process of ensuring that an **organization** has complied with the preventive **measures**, is in a state of **readiness** to contain the effects of a forecasted **disastrous event** to minimize **loss** of life, **injury**, and **damage** to **property**, can **provide** rescue, **relief**, **rehabilitation**, and

other **services** in the **aftermath** of the **disaster**, and has the **capability** and **resources** to continue to sustain its essential **functions** without being overwhelmed by the **demand** placed on them.

Preparedness for the first and immediate **response** is called **emergency preparedness**.



Always remember that disaster comes in the most unexpected time and place. Being ready is always a necessity in all circumstances. The government is giving needed trainings in all our localities. One should participate in this disaster training so that we will not be caught unaware when calamities stricken.



How Much Have You Learned?

Self-Check 3.2

DIRECTIONS: Write **true** if the statement is correct and **false** if the statement is not correct.

- a. General cleanliness in the workplace is an important method of controlling hazards.
- b. Good housekeeping reduces the risk of fire and is cost-effective.
- c. Safety signs are a method of hazard control.
- d. Hygiene (cleanliness) is not as important as a method of controlling hazards.
- e. Before you leave work, wash/shower and change your clothes when necessary to prevent bringing workplace contaminants home to your family.
- f. Your protective clothing should be cleaned regularly.
- g. Inspect your undergarments for signs of contamination.
- h. Your employer should provide facilities so you can wash and/or take a shower at least once a week.



How Do You Apply What You Have Learned?

Show that you learned something by doing this activity.

Activity Sheet 3.1

POSTER MAKING

DIRECTIONS: Draw a poster in consonance with the theme “**Control Hazard, Before It Starts**”

MATERIALS:

1. Pencil
2. Poster paint or oil paint or crayon
3. Whole cartolina (yellow)
4. Ruler

TIME ALLOTMENT:

3 hours



How Well Did You Perform?

**Find out by accomplishing the Scoring Rubric honestly and sincerely.
Remember it is your learning at stake!**

Speed 20%

10 minutes before/ on allotted time ----- 20%

1 minute up to 10 minutes after the allotted time - 10%

11 minutes and more than the allotted time ----- 05%

Originality 50 %

based on judges' deliberation-----50%

Blending of colors 25%

based on judges' deliberation -----25%

Good Housekeeping 5%

all the materials were kept clean and the work area
was properly cleaned -----05%

Total 100%



Congratulations! You did a great job! Rest and relax a while then move on to the next lesson. Good luck!

REFERENCES

- Philippine Electrical Code. 2000 Edition.
- Cardenas, Elpidio. 1989, Fundamental and Elements of Electricity; Philippines: National Bookstore.
- <http://sam.dgs.ca.gov/TOC/3800/3861.htm>
- <http://old.iupac.org/goldbook/TT06915.pdf>

Answer Keys

LESSON 1

HOW MUCH DO YOU ALREADY KNOW?

PRE-TEST

2. Combination Pliers
3. Long Nose Pliers
4. Philips Screw driver
5. Claw Hammer
6. Wire Stripper
7. Portable electric drill
8. Stubby screw driver
9. Electrician's knife
10. Male plug
11. Fuse
12. Utility box
13. Conduits
14. Connectors
15. Circuit Breaker
16. Junction box

SELF CHECK

1. rat tail
2. plain tap
3. duplex cross
4. y splice

PRE-TEST

1. b
2. a
3. d
4. c

SELF CHECK

1. Requisition form
2. Inventory form
3. Job order or work order form
4. Borrower's form

PRE-TEST

a.

1. For me

2. Damaged
3. Correct

B.

1. The receiving person
2. Keep a copy
3. Write the findings and if possible, take a picture

LESSON 2

WHAT DO YOU ALREADY KNOW?

PRE-TEST

I Matching Type:

1. C
2. E
3. A
4. B
5. D

II . Multiple Choice:

1. B
2. A
3. D
4. C
5. A

LO2- CARRY OUT MEASUREMENTS AND CALCULATIONS

A.

1. 10 mm
2. 36 inches
3. 10 cm
4. 1 cm
5. 12 inches

B.

6. cm
7. m
8. dm
9. yd
10. ft

C.

1. 304.8 cm
2. 700 mm
3. 1.25 ft
4. 5.468 yd

LESSON 3

PRETEST

LO1: A.

1. b
2. d
3. a
4. e
5. c

B.

1. Warning
2. Read and understand instruction manual
3. Electrical hazard
4. Voltage danger
5. Power panel
6. Circuit breaker
7. Battery

PRE-TEST

LO2:

QUANTITY	ELECTRICAL FIXTURES
8 pieces	Lamp outlets
8 pieces	Duplex convenience outlets
4 pieces	Single gang switches
1 piece	Two gang switch
1 piece	Three gang switch

SELF CHECK

L01.

1. b
2. d
3. a
4. e
5. c

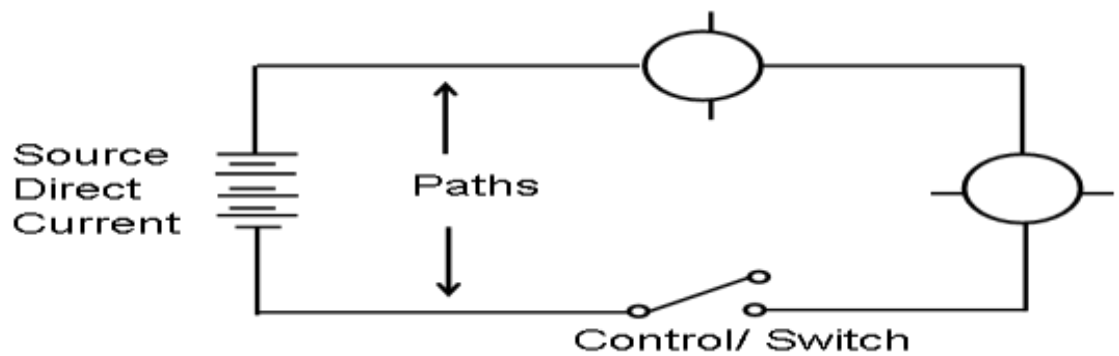
HOW MUCH DO YOU LEARNED?

SELF CHECK

Electrical Plan and Layout

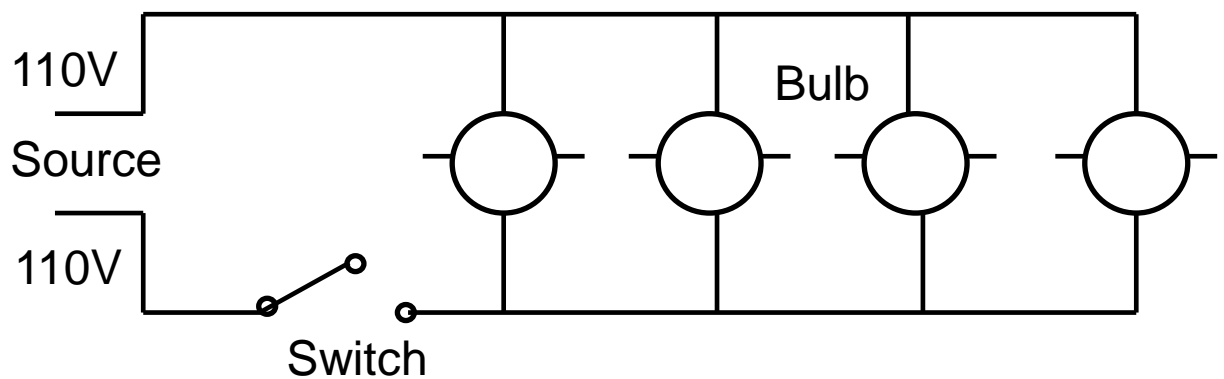
L02.

- 1.



Schematic Diagram of Series Circuit

- 2.



SCHEMATIC DIAGRAM OF PARALLEL CIRCUIT

HOW DO YOU APPLY WHAT YOU LEARNED?






ELECTRICAL SIGNS

LO1. Analyze electrical symbols and signs.

A.

												R
P	R	O	H	I	B	I	T	I	O	N	E	
				S						G		
	C			A				W	N			
	A			F				A				
	U			E			D	R				
	T			T		E		N				
	I			Y	G			I				
	O			A				N				
	N		T	L				G				
		L		E								
	O			R								
V				T								

B.

<p>a. Safety alert</p>	
<p>b. Prohibition</p>	
<p>c. Voltage danger</p>	
<p>d. Warning</p>	
<p>e. Electrical hazard</p>	

SELF CHECK

Electrical Plan

LO2

QUANTITY	ELECTRICAL FIXTURES
19 pieces	Lamp outlets
0	Duplex convenience outlet
4 pieces	Single gang switches
3 pieces	Two gang switches
3 piece	Three gang switches

HOW MUCH HAVE YOU LEARNED?

SELF CHECK

- I. **Text Twist:**
 1. Wire gauge
 2. Voltmeter
 3. Clamp meter
 4. Push pull rule
- II. **Parts of Multi-tester**
 1. Scale
 2. Adjustment screw
 3. Range selector knob
 4. Pointer
 5. Zero-ohm adjustment knob
 6. Test probe

LESSON 4

LO1: Check condition of tools and equipment

1. Pneumatic floor jack
2. Hand tools
3. Screw drivers
4. Wrench
5. Puller
6. Vacuum cleaner
7. Air drill
8. Personal Protective Equipment (PPE)

- 9. Pneumatic Torque Wrench
- 10. Machine/Power tools

SELF CHECK

LO1. Check condition of tools and equipment

Hand tools	Power tools	Pneumatic tools
1. Screw drivers	1.Grinding Wheels	1.Air Racket
2.Wrenches	2.Vacuum Cleaner	2.Air Drill
3.Pullers	3.Electric Drill	3.Air Chisel
4.Hammers	4.	4.

Pre-Test

LO2: Perform basic preventive maintenance

A.

- 1. D
- 2. C
- 3. E
- 4. A
- 5. B

B.

- 1. b. sweepingⁱ
- 2. d. self-discipline
- 3. a. sorting
- 4. b. systematizing
- 5. c. sanitizing

HOW MUCH HAVE YOU LEARNED

Self-Check

LO2. Perform basic preventive maintenance

a.

- 1. Water (✓)
- 2. Kerosene (X)
- 3. Detergent soap (✓)
- 4. Gasoline (X)
- 5. Thinner (X)

b.

1. SILICON LUBRICANT
2. WIRE PULLING LUBRICANT
3. LUBRICATING OIL/ ENGINE OIL
4. ANTI-RUST LUBRICANT SPRAY
5. ALL PURPOSE ANTI-RUST LUBCANT

WHAT DO YOU ALREADY KNOW?

LO 3: Store tools and equipments

Pre-test

For hand tools;

1. TRUE
2. FALSE
3. TRUE
4. TRUE
5. TRUE
6. FALSE
7. TRUE

For equipment;

8. FALSE
9. TRUE
10. TRUE

SELF CHECK

HOW MUCH HAVE YOU LEARNED?

LO3: Store tool and equipment

Hand tools:

1. Clean dirt and debris from tools after each use.
2. Oil metal parts to prevent rust.
3. Lightly sand rough wooden handles and apply linseed oil.
4. Repair loose handles.
5. Sharpen blades of cutting tools.
6. Store tools in a clean dry storage area.
7. Protect surfaces of cutting tools in storage.

Power tools:

- heat and cold
- noise
- noise
- power and hand tools

heat and cold
ventilation
working and walking surface

3. Biological hazard

- unclean restrooms
- mold and fungus
- bacteria
- insect stings
- animal bites
- poorly stored medical waste

4. Ergonomic Hazard or Job related hazard

- lighting
- chairs
- lifting
- repeated movements
- computer screens

5. Stress

- heavy workloads
- lack of control over the pace of work
- shift work
- noise
- working by yourself
- fear of job loss
- conflict with the employer

HOW MUCH HAVE YOU ALREADY KNOW?

PRETEST

LO 2: EVALUATE HAZARDS AND RISKS

A.

1. Personal Protective Equipment

2. Eliminate hazards

3. Administrative control

4. Asses the risk

5. identify hazard

A. DIRECTION. TRUE OR FALSE. In the statements below write true if the statement is true and false if the statement is not correct.

1. General cleanliness in the workplace is an important method of controlling hazards.

2. Good housekeeping reduces the risk of fire and is cost-effective.
3. Safety signs are method of hazard control.
4. Hygiene (cleanliness) is not so important as a method of controlling hazards
5. Before you leave work, wash/shower and change your clothes when necessary to prevent bringing workplace contaminants home to your family.

B.

- 1.TRUE
- 2.TRUE
- 3.FALSE
- 4.FALSE
- 5.TRUE

SELF CHECK

Lesson 2: Evaluate hazards and risks

1. b
2. b
3. c
4. d
5. b

SELF CHECK

LO3: PERSONAL HYGENE

1. TRUE
2. TRUE
3. FALSE
4. FALSE
5. TRUE
6. TRUE
7. TRUE

Acknowledgement

This Learning Module was developed for the Exploratory Courses in Technology and Livelihood Education, Grades 7 and 8 of the K to 12 Curriculum with the assistance of the following persons:

This Learning Module on **ELECTRICAL INSTALLATION AND MAINTENANCE NC II** was developed by the following personnel:

MODULE WRITERS

HECTOR M. VALLARTA
Electrical Technology Coordinator
San Pedro Relocation Center National High School
San Pedro, Laguna

ROMAN A. CABUSORA JR.
Master Teacher I
San Francisco High School
Bago Bantay, Quezon City

REVIEWERS

GIL P. CASUGA
Chief TESD Specialist

REYNALDO S. DANTES
Senior TESD Specialist

MARIA A. ROQUE
Senior TESD Specialist

BERNADETTE S. AUDIJE
Senior TESD Specialist

VICTORIO N. MEDRANO
Principal IV, SPRCNHS

PARALUMAN R. GIRON, Ed.D.
Chair, Sub-TWG on K to 10

BRENDA B. CORPUZ, Ph.D.
TA for K to 12 Curriculum

OFELIA O. FLOJO
Retired Assistant Chief, EED, Region IV-A

BEATRIZ A. ADRIANO
Principal IV, ERVHS

AIDA T. GALURA
VSA II, ACNTS

DOMINGA CAROLINA F. CHAVEZ
Principal II, MBHS

DOCUMENTORS / SECRETARIAT

PRISCILLA E. ONG
K to 12 Secretariat

FREDERICK G. DEL ROSARIO
Head Teacher III, BNAHS

EMMANUEL V. DIONISIO
Head Teacher III, AFGBMTS

LYMWEL P. LOPEZ
Teacher I, AFGBMTS

DANTE D. VERMON JR.
Teacher I, AFGBMTS

CHERLYN F. DE LUNA
Teacher I, AFGBMTS

JOANNA LISA C. CARPIO
Teacher I, BNAHS

ROMANO T. LOPEZ
Teacher I, BNAHS

Dir. IMELDA B. TAGANAS

*Executive Director, Qualifications Standards Office
K to 12 Learning Area Team Convenor, TLE/TVE*
